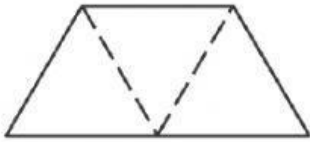
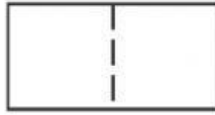


Tina made a new shape by putting 3 triangles together. What shape did she make?



- A. rectangle  
B. trapezoid  
C. circle

What two shapes were used to make this rectangle?



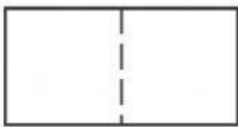
- F. two triangles  
G. two squares  
H. two trapezoids

How many equal parts make up the whole?



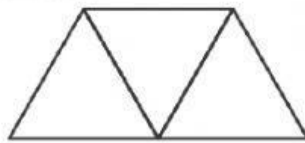
- F. 4  
G. 3  
H. 2

Circle the two shapes that were used to make this rectangle.



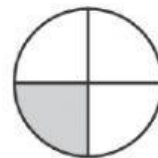
- two trapezoids  
two squares

Carlos put together the three shapes shown. Circle the new shape he made.




- trapezoid  
circle

How many parts are shaded?



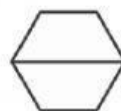
\_\_\_\_\_ of \_\_\_\_\_ parts

Circle the two shapes that were used to make this square.



- two triangles  
two rectangles

Hannah joined two shapes. She made the following shape. Circle the two shapes Hannah joined together.



- two triangles  
two trapezoids

Circle the shape that shows 2 equal parts.

