


# What time is it?

4  Listen and circle the correct option.



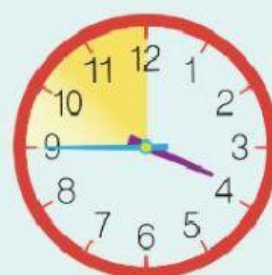
two / three  
o'clock



a quarter past  
three / four



half past  
three / four



a quarter to  
four / five

5 Read and match.




It's four o'clock.

It's a quarter to two.

It's half past nine.

It's a quarter past six.



6  Listen and write the time in numbers.

What time is it?

1 .....

3 .....

2 .....

4 .....