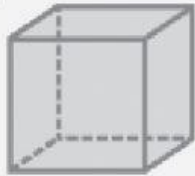


3D Shapes

Name each 3D shape and write down the number of faces, vertices and edges.

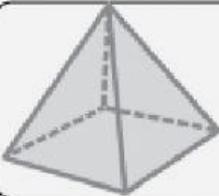


Name: _____

Edges: _____

Faces: _____

Vertices: _____

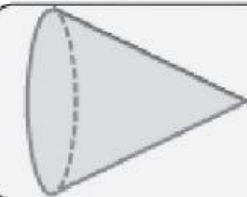


Name: _____

Edges: _____

Faces: _____

Vertices: _____

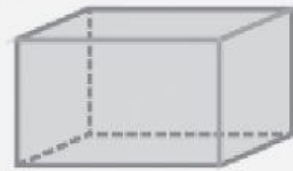


Name: _____

Edges: _____

Faces: _____

Vertices: _____

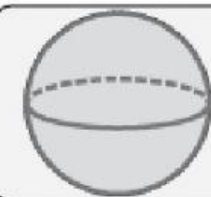


Name: _____

Edges: _____

Faces: _____

Vertices: _____



Name: _____

Edges: _____

Faces: _____

Vertices: _____