

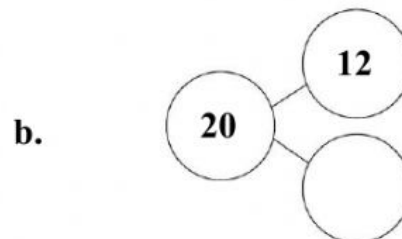
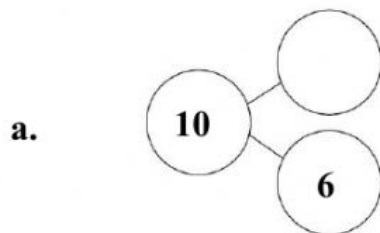
Unit 5: Addition and Subtraction (1)

Lessons: 1 and 2

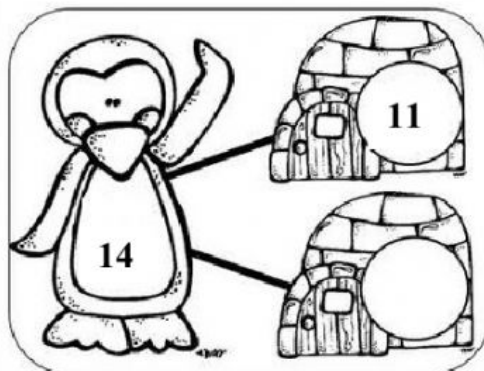
Name: _____

Date: _____

Q1. Complete the number bonds for 10 and 20.



Q2. Find a way of making 14. Then write the number sentence.



$$\boxed{} + \boxed{} = \boxed{14}$$

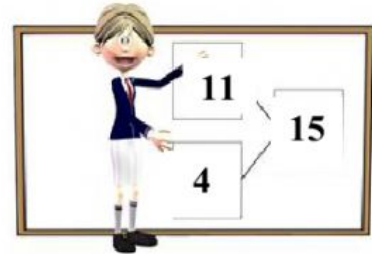
Q3. Finish the number sentence for this bond.

$11 + \boxed{} = 15$

$\boxed{} + \boxed{} = 15$

$15 - \boxed{} = 4$

$\boxed{} - 4 = 11$



Q4. Write four pairs of numbers that make 16.

(a) 16

--	--	--	--

(b) Choose one of the number pairs and write four facts to match it.

--	--	--	--

