








Name : _____	Class IV _____														
IDENTIFY THE COMPONENTS OF THE SYSTEM UNIT AND WRITE DOWN THEIR NAMES IN THE SPACE PROVIDED															
	<table border="1" style="width: 100%; border-collapse: collapse;"> <tr><td style="text-align: center; padding: 5px;">1</td><td style="height: 30px;"></td></tr> <tr><td style="text-align: center; padding: 5px;">2</td><td style="height: 30px;"></td></tr> <tr><td style="text-align: center; padding: 5px;">3</td><td style="height: 30px;"></td></tr> <tr><td style="text-align: center; padding: 5px;">4</td><td style="height: 30px;"></td></tr> <tr><td style="text-align: center; padding: 5px;">5</td><td style="height: 30px;"></td></tr> <tr><td style="text-align: center; padding: 5px;">6</td><td style="height: 30px;"></td></tr> <tr><td style="text-align: center; padding: 5px;">7</td><td style="height: 30px;"></td></tr> </table>	1		2		3		4		5		6		7	
1															
2															
3															
4															
5															
6															
7															

MATCH THE FOLLOWING PICTURES WITH THEIR PORT NAME			
1.		a.	
2.		b.	
3.		c.	
4.		d.	
5.		e.	
6.		f.	