



### C. Use the map to find which states are described.

Utilise la carte pour trouver les états dont il est question.

This state is in the <b>North West</b> of Canada. Its capital city is Juneau. There you can see polar bears.	
This state is in the Pacific Ocean. Its capital city is Honolulu. It is very popular for surfing.	
This state is in the <b>South East</b> . There a lot of cities have French names. Its capital city is Baton Rouge. It is famous for jazz music.	
This state is in the <b>South West</b> . Its capital city is Austin. It is renowned for its cowboys and its oil wells.	
This state is in the <b>North East</b> and has a border with Canada. Its capital city is Albany. There you can admire the Niagara Falls.	

**In the exercise, underline three different ways to say “célèbre”.**

Dans l'exercice, souligne trois façons différentes de dire « célèbre ».

### D. Use the map to find what these states are famous for.

Utilise la carte pour trouver ce qui fait la célébrité de ces états.




*Ex: Colorado is in the West. Its capital city is Denver. It is famous for the Rock Mountains.*

Arizona	
Wyoming	
Florida	
Nevada	
Connecticut	

E. Use this cards to make sentences about these three American symbols. Visit <https://www.americanhistoryforkids.com> to find more information.

Utilise les informations pour faire des phrases sur ces trois symboles Américains. Visitez <https://www.americanhistoryforkids.com> pour trouver plus d'information.

It was given to the American people	The heads of four presidents of the United States	in South Dakota.	are sculpted on this granite cliff
In 1620, 102 Pilgrims sailed to the New World	by the French people		for religious reasons.
on this ship	because they were persecuted in England		and it was inaugurated in 1886
	in New York Harbor		

 <p>Mount Rushmore</p>	<p>The Mount Rushmore:</p>
 <p>Statue of Liberty</p>	<p>The Statue of Liberty:</p>
 <p>Mayflower</p>	<p>The May Flower:</p>