

1. Match the phrases in Column A with the correct words in Column C and write the answers in the spaces in Column B.

	COLUMN A	COLUMN B	COLUMN C
a.	Scientists classify animals into _____ groups.		five
b.	A plant that has flowers is called a _____ plant.		eggs
c.	Animals with a backbone can be classified into _____ groups.		Sun
d.	Most fish lay _____.		two
e.	Birds breathe with their _____.		lungs
			flowering

(5 marks)

2. Write "T" (True) against the correct statement and "F" (False) against the wrong statement.

- a. We see with our ears. ()
- b. All fish live in water. ()
- c. Amphibians lay eggs on land. ()
- d. Reptiles have scales on their body. ()
- e. An elephant is an example of a mammal. () (5)

3. Fill in the blanks with the correct words.

birth	six	nestling	fly	microscope
-------	-----	----------	-----	------------

breaking	cat	moist	move	table
----------	-----	-------	------	-------

- a. Fungi grow well in places that are _____.
- b. We use a _____ to see microorganisms.
- c. All insects have _____ legs.
- d. Most mammals give _____ to their young.
- e. The young of a bird is called a _____.
- f. The feathers protect the body and help the bird to _____.
- g. A _____ is an example of non-living thing.
- h. Most animals _____ from place to place by themselves.
- i. A flexible material can be bent easily without _____.
- j. A _____ is an example of animal with a backbone.

(10 marks)

4. Look at the picture below in figure 1.




Figure 1

- a) Label these parts of the bird above. (4)
- b) What is the name of this bird? _____. (1)
- c) What is the bird covered with? _____. (1)
- d) Which part of the bird helps it to fly? _____. (1)
- e) Birds are the only kinds of animals that have bodies covered with _____. (1)
- f) List two kinds of birds that cannot fly. _____ and _____. (2)

(10 marks)

5. Look at the picture in figure 2 below.




Figure 2

a) Name the animals that can be found in the picture above under the correct group of animals.

Animals with a backbone	Animals without backbone
1.	1.
2.	2.
3.	3.

(6 marks)

6. Study the pictures of animals below in figure 3.




Figure 3

Answer all the questions related to the pictures above.

- i) These mammals live on _____.
- ii) These mammals have _____ on their bodies.
- iii) These mammals give _____ to their young.
- iv) These mammals breathe with their _____.

(4 marks)

END OF PAPER

TOTAL MARKS: 40