

# Maths

## Verbally


### Comparing and ordering numbers

#### Let's Learn


Maths  
Lab

a)

Picture  
It



45




57


57 is greater than 45.

Let's  
Try

b)



57



59

57 is smaller than 59.

- c) 59 is the greatest number.  
45 is the smallest number.

Arrange the numbers in order.  
Begin with the greatest.

59, 57, 45  
(greatest)

## DO

### Let's Do

1. Fill in the blanks with **greater than** or **smaller than**.
  - a) 62 is \_\_\_\_\_ 56.
  - b) 85 is \_\_\_\_\_ 87.
2. Arrange the numbers in order.  
Begin with the smallest.
  - a) 21, 66, 50 \_\_\_\_\_
  - b) 78, 73, 58 \_\_\_\_\_

## Practice 2

1.
  - a) What number is 10 more than 52?
  - b) What number is 20 more than 52?
  - c) What number is 10 less than 96?
  - d) What number is 20 less than 96?
2. Complete the number patterns.
  - a) 38, 40, 42, \_\_\_\_\_, \_\_\_\_\_, \_\_\_\_\_, 50
  - b) 45, 50, 55, \_\_\_\_\_, \_\_\_\_\_, 70, \_\_\_\_\_
  - c) 70, 75, \_\_\_\_\_, \_\_\_\_\_, 90, \_\_\_\_\_, 100
3.

59

81

53

  - a) Which is the greatest number?
  - b) Which is the smallest number?
  - c) Arrange the numbers in order.  
Begin with the greatest.

DO

## Exercise 10 Order of Numbers

1. Circle the greater number.

a) 67, 48

b) 50, 63

2. Circle the smaller number.

a) 75, 55

b) 82, 84

3. Arrange the numbers in order.  
Begin with the greatest.

40

36

47

\_\_\_\_\_

(greatest)

4. Arrange the numbers in order.  
Begin with the smallest.

91

95

89

\_\_\_\_\_

(smallest)

## DO

5. Arrange the numbers in order.  
Begin with the given number.

a)	<div><div>12</div><div>36</div><div>43</div><div>17</div></div>	<div><div>12</div><div></div><div></div><div></div></div> <div>The smallest number is ____.</div> <div>The greatest number is ____.</div>
b)	<div><div>29</div><div>50</div><div>52</div><div>38</div></div>	<div><div>52</div><div></div><div></div><div></div></div> <div>The smallest number is ____.</div> <div>The greatest number is ____.</div>
c)	<div><div>93</div><div>84</div><div>68</div><div>86</div></div>	<div><div>93</div><div></div><div></div><div></div></div> <div>The smallest number is ____.</div> <div>The greatest number is ____.</div>
d)	<div><div>60</div><div>95</div><div>72</div><div>58</div></div>	<div><div>58</div><div></div><div></div><div></div></div> <div>The smallest number is ____.</div> <div>The greatest number is ____.</div>

Click here:

