






ANIMALS

Count the animals and write the number in the square.

<p>DUCKS</p> <input data-bbox="555 454 681 566" type="text"/> 	<p>FROGS</p> <input data-bbox="1123 454 1249 566" type="text"/> 
<p>RABBITS</p> <input data-bbox="585 960 711 1072" type="text"/> 	<p>FOXES</p> <input data-bbox="1123 960 1249 1072" type="text"/> 
<p>MOUSE</p> <input data-bbox="555 1498 681 1610" type="text"/> 	<p>SNAKES</p> <input data-bbox="1171 1476 1297 1588" type="text"/> 