

Name: _____

Date: _____

Week: _____

Divide the food between the kids. Circle the correct equation.



$5 \times 2 =$

$12 \div 4 =$

$3 \times 3 =$

$6 \div 2 =$

$8 \div 4 =$

$8 - 4 =$

$3 + 3 =$

$6 \times 10 =$

How many bananas
does each kid get? ____

How many muffins
does each kid get? ____



$6 \div 2 =$

$6 \div 3 =$

$3 \times 4 =$

$12 \div 2 =$

$6 \div 4 =$

$6 \div 6 =$


$12 \div 4 =$

$12 - 4 =$

How many pretzels
does each kid get? ____

How many cherries
does each kid get? ____

Divide the food between the kids. Circle the correct equation.



$$9 - 6 =$$

$$9 + 3 =$$

$$9 - 3 =$$

$$9 \div 3 =$$

How many bananas
does each kid get? ____




$$10 \div 2 =$$

$$10 \times 2 =$$

$$5 \times 2 =$$

$$10 - 2 =$$

How many muffins
does each kid get? ____




$$6 + 2 =$$

$$8 \div 2 =$$

$$6 - 2 =$$

$$8 \div 4 =$$

How many pretzels
does each kid get? ____



$$3 \times 6 =$$

$$12 \div 2 =$$

$$18 \div 2 =$$

$$18 - 6 =$$

How many cherries
does each kid get? ____