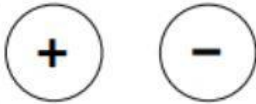



NATURAL SCIENCE UNIT 9

1. Do they attract or repel?

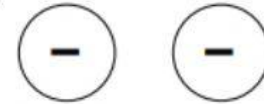
A



B



C



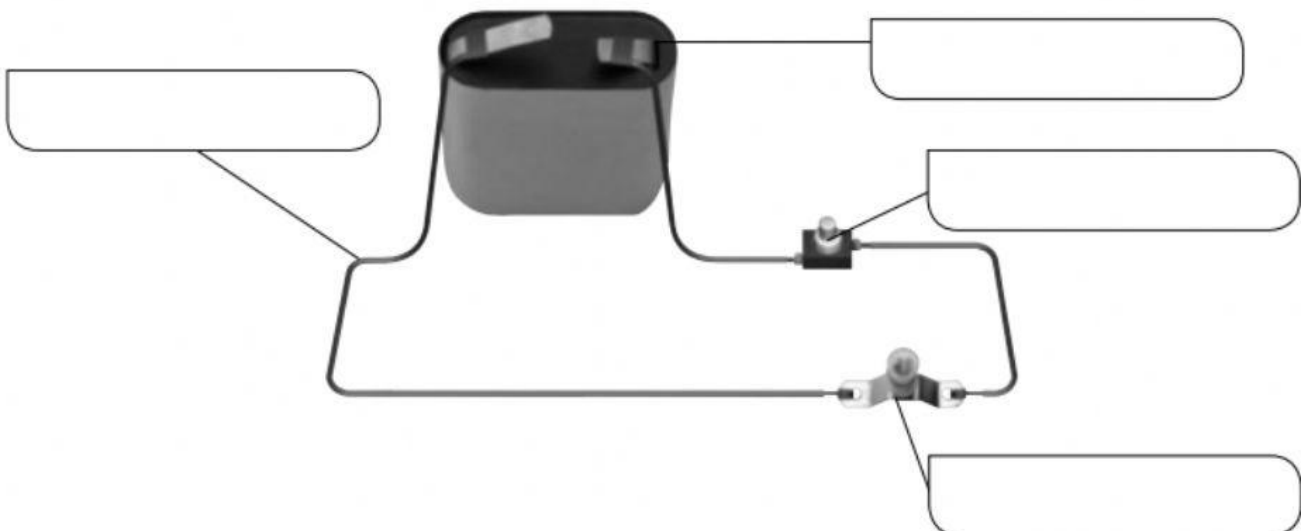
2. Look at the photographs and write the effect of electric current.







3. Label the electric circuit.



4. Read the energy transformations. Write the type of power plant.

a. mechanical energy from water → electricity

_____ power plants

b. chemical energy from fossil fuels → electricity

_____ power plants

c. mechanical energy from wind → electricity

_____ power plants

d. thermal energy from the Sun → electricity

_____ power plants