


SOCIAL SCIENCE – UNIT 4 – OUR SOLAR SYSTEM

1. Write the correct name under the following pictures:

ASTEROID MOON COMET SUN PLANET TELESCOPE



2. Choose the correct option in each case:



EARTH

MARS



NEPTUNE

JUPITER




MERCURY

SATURN



URANUS

MARS



NEPTUNE

VENUS

3. Complete the sentences:

SEVEN ROTATION REVOLUTION 24

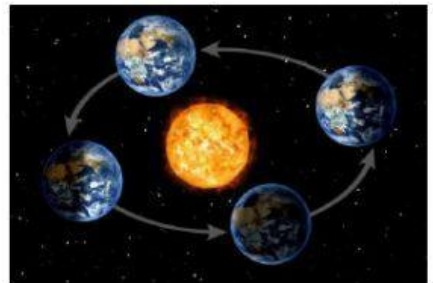
The movement of the Earth around its own axis is called

The movement of the Earth around the Sun is called

There are hours in a day.

There are days in a week.

4. Match:



ROTATION

WINTER

CLOCK

CALENDAR

SUMMER

REVOLUTION

5. Write the days of the week in the correct order.

SATURDAY	THURSDAY	MONDAY	WEDNESDAY	SUNDAY	TUESDAY	FRIDAY
----------	----------	--------	-----------	--------	---------	--------

1.

2.

3.

4.

5.

6.

7.