







NOMBRE: .....

PARA COMPLETAR COMO EN EL EJEMPLO

 <p>DIEZ UNIDADES      UNA DECENA</p>	$10 + 0 = 10$ <p><b>1 DECENA + 0 UNIDADES</b></p>
	$\square + \square = 11$ <div style="display: flex; align-items: center; margin-top: 10px;"> <div style="border: 2px solid red; width: 150px; height: 40px; margin-right: 10px;"></div> <div style="margin-right: 10px;">+</div> <div style="border: 2px solid blue; width: 150px; height: 40px;"></div> </div>
	$\square + \square = \dots\dots\dots$ <div style="display: flex; align-items: center; margin-top: 10px;"> <div style="border: 2px solid red; width: 150px; height: 40px; margin-right: 10px;"></div> <div style="margin-right: 10px;">+</div> <div style="border: 2px solid blue; width: 150px; height: 40px;"></div> </div>
	$\square + \square = \dots\dots\dots$ <div style="display: flex; align-items: center; margin-top: 10px;"> <div style="border: 2px solid red; width: 150px; height: 40px; margin-right: 10px;"></div> <div style="margin-right: 10px;">+</div> <div style="border: 2px solid blue; width: 150px; height: 40px;"></div> </div>
	$\square + \square = \dots\dots\dots$ <div style="display: flex; align-items: center; margin-top: 10px;"> <div style="border: 2px solid red; width: 150px; height: 40px; margin-right: 10px;"></div> <div style="margin-right: 10px;">+</div> <div style="border: 2px solid blue; width: 150px; height: 40px;"></div> </div>
	$\square + \square = \dots\dots\dots$ <div style="display: flex; align-items: center; margin-top: 10px;"> <div style="border: 2px solid red; width: 150px; height: 40px; margin-right: 10px;"></div> <div style="margin-right: 10px;">+</div> <div style="border: 2px solid blue; width: 150px; height: 40px;"></div> </div>



$$\square + \square = \dots\dots\dots$$

$$\square + \square$$



$$\square + \square = \dots\dots\dots$$

$$\square + \square$$



$$\square + \square = \dots\dots\dots$$

$$\square + \square$$



$$\square + \square = \dots\dots\dots$$

$$\square + \square$$



$$\square + \square = \dots\dots\dots$$

$$\square + \square$$



$$\square + \square = \dots\dots\dots$$

$$\square + \square$$