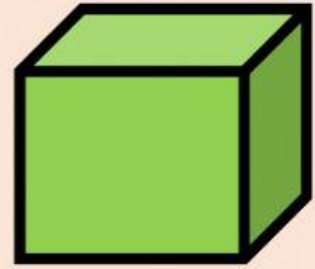
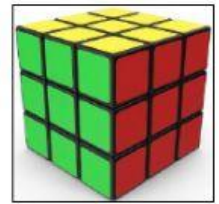



3D shape: Cubes

- I can identify a cube.
- I can write number of faces and vertices the cube has.



1. Select objects that look like a cube:



2. Write number of faces and vertices in a cube:

The cube has faces.

The cube has vertices.

3. The faces of a cube look like:

rectangle

circle

square

