


Review Unit 1: ORIENTATION

1. Tick the plans



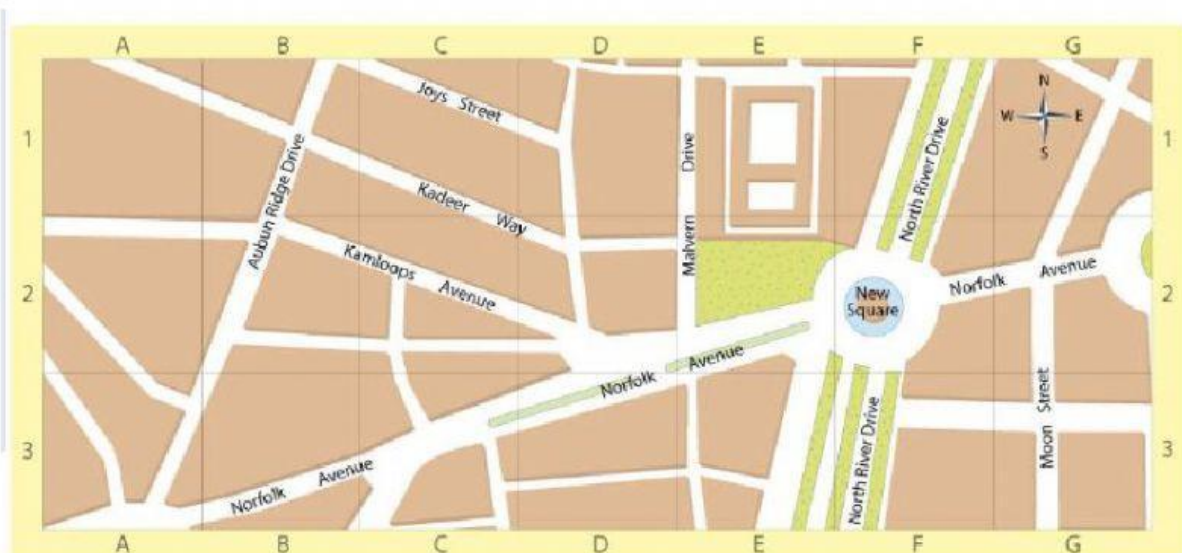
2. Match



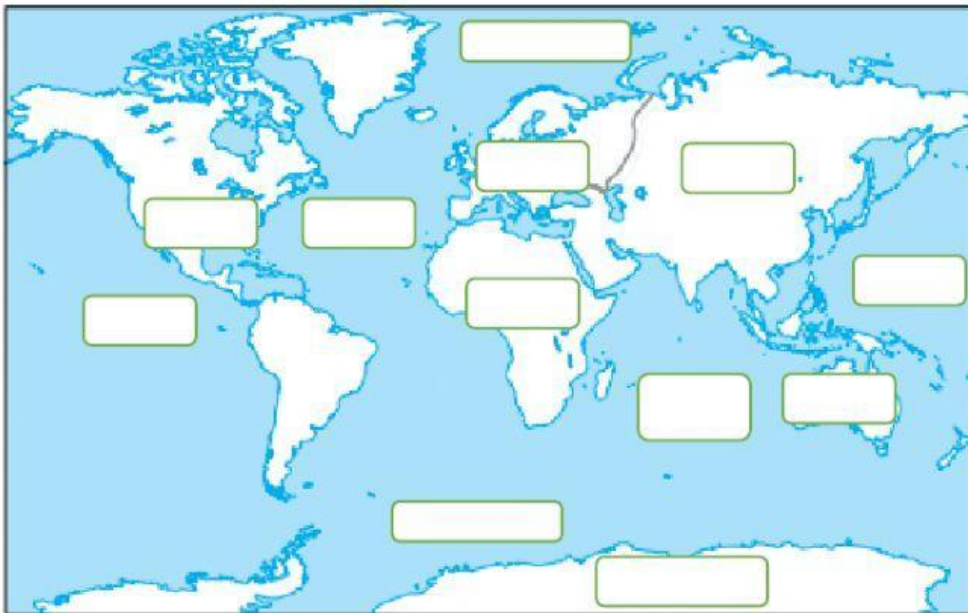
- Key
- Scale
- Compass Rose
- Toponymy

3. Read and drag

The swimming pool is in A3.
 The school is in D2.
 The bank is in B1.
 The library is in C3.
 The shop is in F2.



4. Label de oceans and the continents on the map.



- America
- Atlantic Ocean
- Oceania
- Indian Ocean
- Asia
- Pacific Ocean
- Antarctica
- Arctic Ocean
- Europa

- Africa
- Antarctic Ocean
- Pacific Ocean

5. Types of maps. Match.

- This map shows the approximate position and size of all the continents and oceans.
- This map shows the natural features like rivers and mountains.
- This map marks the borders of the countries.
- This map has symbols that explain a topic.



6. Read and choose. Which type of map do you need to answer the questions?

What is the capital of Mexico?

What are the names of the mountains in Canada?

political

thematic

physical

What is the weather today?

political

thematic

physical

What are the countries near China?

physical

thematic

political

What are the different highways in the UK?

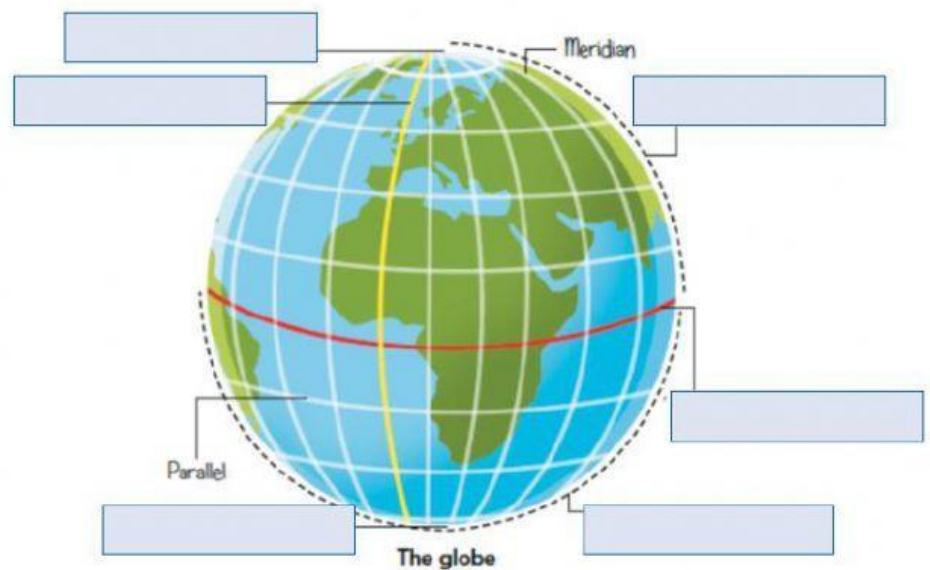
thematic

political

physical

7. Label the globe

South Pole
North Pole
Northern Hemisphere
Greenwich Meridian
Equator
Southern Hemisphere



8. Choose the correct option in each sentence.

- On a _____ we can see two different poles. There is a _____ at the top and a _____ at the bottom.
- There are also _____ imaginary lines called parallels and _____ imaginary lines called meridians.
- The _____ divides the globe into two hemispheres.
- The _____ joins the two poles.