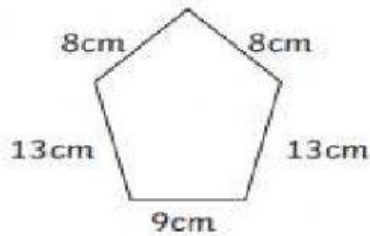


Task 1: Watch video <https://www.youtube.com/watch?v=AAy1bsazcgM>

Task 2: Calculate the perimeter of each of the shapes- write the answers inside the shapes.

1)



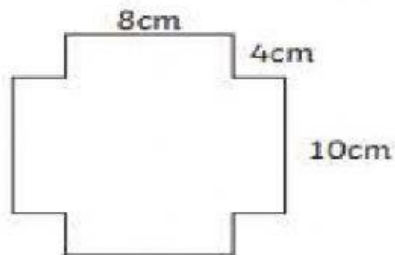
2)



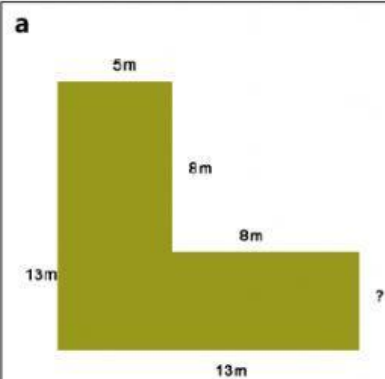
3)



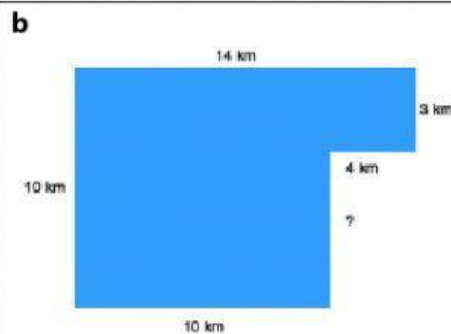
4)



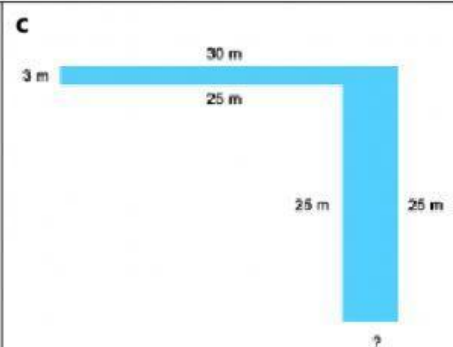
Task 3: Find the perimeter of the following shapes.



Perimeter:




Perimeter:



Perimeter:

Reasoning

Here is a square inside another square.



The perimeter of the inner square is 16 cm

The outer square's perimeter is four times the size of the inner square.

What is the length of one side of the outer square?

How do you know? What do you notice?

Answer: