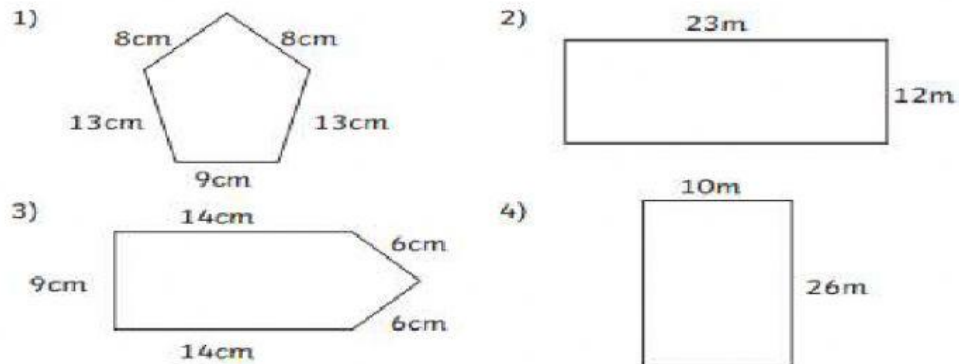





**Task 1:** Watch video: <https://www.youtube.com/watch?v=AAy1bsazcgM>

**Task 2:** Calculate the perimeter of each of the shapes- write the answers inside the shapes.



**Task 3:** Can you calculate the perimeter of the shapes below?

<p><b>a.</b></p>  <p>Perimeter:</p>	<p><b>b.</b></p>  <p>Perimeter:</p>	<p><b>c.</b></p>  <p>Perimeter:</p>
--	--	--

**Reasoning:** How do you work out the perimeter of a shape?

Do you always have to have the measurement of each side, before you calculate the perimeter?