

## Ch – 12 Statistical Displays (L - 4 Shape of Data Distribution)

Concept cum Practice

Grade 6 Elite Maths

United Arab Emirates  
Ministry of Education



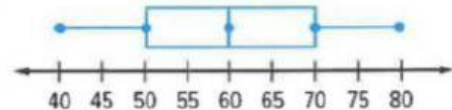
Name: \_\_\_\_\_

Date: 31/05/2020

Learning objective – To Describe a data distribution in terms of its shape

7. **MP Persevere with Problems** Explain why you cannot describe the specific location of the center and spread of the box plot shown using the most appropriate measures.

Calories in Servings of Fruits



Distribution type \_\_\_\_\_

Q1 = \_\_\_\_\_

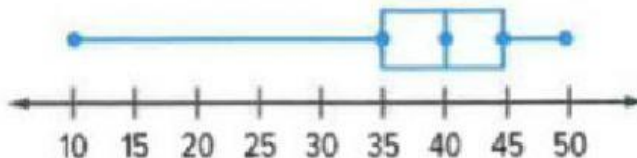
Q3 = \_\_\_\_\_

IQR = \_\_\_\_\_

Why can't we describe the specific location of the centre?

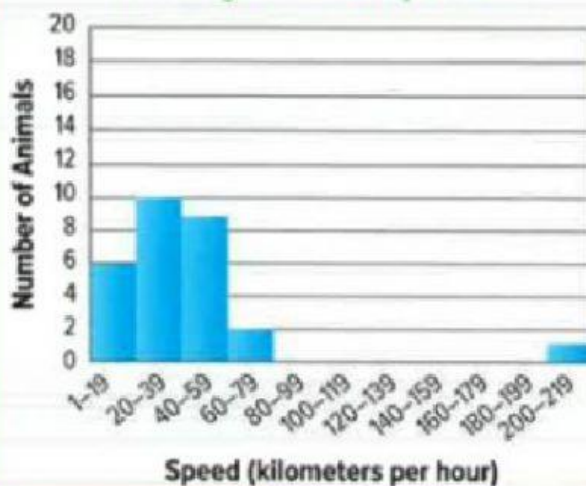
Reason = \_\_\_\_\_

Height of Trees (m)



Distribution Type = \_\_\_\_\_

Average Animal Speeds



Distribution Type = \_\_\_\_\_

Gap range = \_\_\_\_\_

Outlier range = \_\_\_\_\_

Peak = \_\_\_\_\_

Cluster range = \_\_\_\_\_