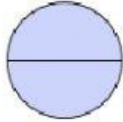


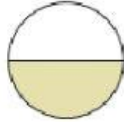
Determine which letter best describes the shaded portion.

1)




- A. three-fourths
B. two halves
C. one quarter

2)



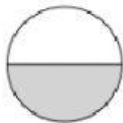
- A. one half
B. four-fourths
C. three-fourths

3)



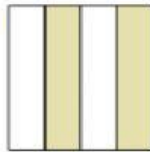
- A. one-fourth
B. two halves
C. three quarters

4)



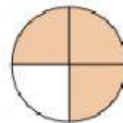
- A. two halves
B. one quarter
C. one half

5)



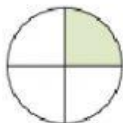
- A. two quarters
B. three-fourths
C. two halves

6)



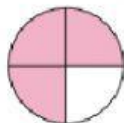
- A. two halves
B. three quarters
C. one half

7)



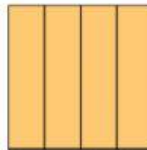
- A. four-fourths
B. two halves
C. one-fourth

8)



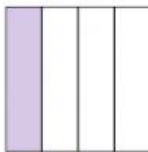
- A. two quarters
B. three quarters
C. two halves

9)



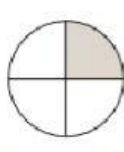
- A. one-fourth
B. four quarters
C. three quarters

10)



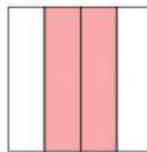
- A. one quarter
B. three quarters
C. two halves

11)



- A. one quarter
B. three-fourths
C. two halves

12)



- A. two halves
B. four quarters
C. two quarters

Answers

1. _____

2. _____

3. _____

4. _____

5. _____

6. _____

7. _____

8. _____

9. _____

10. _____

11. _____

12. _____