











Determine which letter best represents each fraction.

- 1) Which choice best shows  $\frac{2}{3}$ ? 
- 2) Which choice best shows  $\frac{2}{4}$ ? 
- 3) Which choice best shows  $\frac{1}{6}$ ? 
- 4) Which choice best shows  $\frac{4}{8}$ ? 
- 5) Which choice best shows  $\frac{1}{3}$ ? 
- 6) Which choice best shows  $\frac{3}{4}$ ? 
- 7) Which choice best shows  $\frac{4}{6}$ ? 
- 8) Which choice best shows  $\frac{5}{8}$ ? 
- 9) Which choice best shows  $\frac{1}{4}$ ? 
- 10) Which choice best shows  $\frac{2}{6}$ ? 

# **Answers**

1. \_\_\_\_\_

2. \_\_\_\_\_

3. \_\_\_\_\_

4. \_\_\_\_\_

5. \_\_\_\_\_

6. \_\_\_\_\_

7. \_\_\_\_\_

8. \_\_\_\_\_

9. \_\_\_\_\_

10. \_\_\_\_\_