



Name: _____


Subtracting Decimals- Decimal and Decimal


Instructions: Solve each problems below, writing your answers in the space provided.




 Line up your numbers according to their correct place value

 Write larger number at the top and smaller number below it

 Remember your **PLACEHOLDING zeroes**

 Don't forget your **decimal point**

 If you come up on a column where the digit at the bottom is **LARGER** than the digit at the top, remember the jingle: “**More on the floor, borrow next door**”

1) Solve

$$\begin{array}{r} 12.780 \\ - 5.110 \\ \hline \end{array}$$

2) Solve

$$\begin{array}{r} 9.780 \\ - 5.239 \\ \hline \end{array}$$

3) Solve

$$\begin{array}{r} 24.976 \\ - 6.3 \\ \hline \end{array}$$

4) Find the DIFFERENCE between 45.8, and 9.001

***Remember that the word DIFFERENCE in Mathematics mean SUBTRACT**

Answer: _____

5) Mark had \$25.50. He bought patty for \$12.33. How much money does he have left?

Answer: _____