


Unit 1: Whole Numbers (1)

Lessons: 1,2,3 and 4


Name: _____

Date: _____

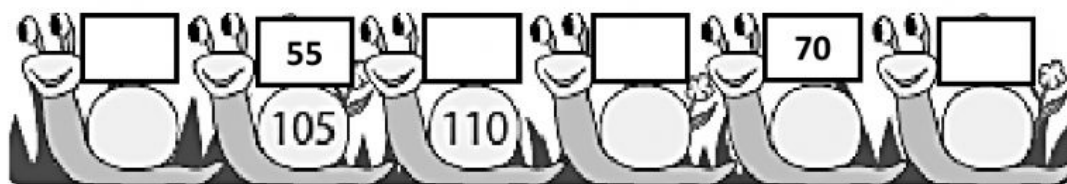
Q1. Write the missing numbers.



Q2. Count on in 2s to fill in the numbers.



Q3. Count on in 5s to fill in the missing numbers.



Q4. Count back in 10s to fill in the missing numbers.



Q5. Count on in 2s. Circle each set.



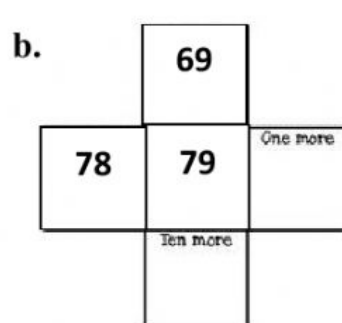
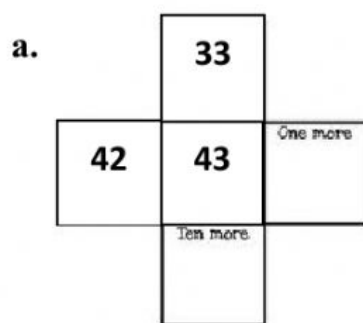
There are bicycles.

Q6. Count on in 5s. Circle each set.



There are coins.

Q7. Find 1 more than and 10 more than.



Q8. Find 1 less than and 10 less than.

