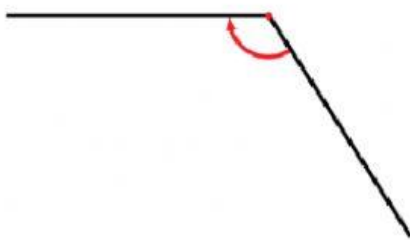



Sotto ciascun angolo scrivi la categoria a cui appartiene (usa solo lettere minuscole): acuto, retto, ottuso, giro, piatto.



Angolo .....




Angolo .....



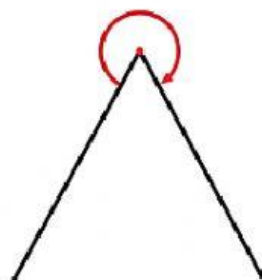
Angolo .....



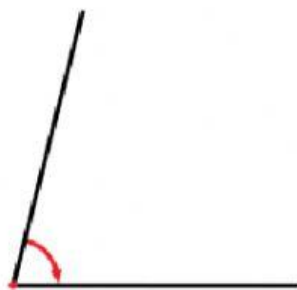
Angolo .....



Angolo .....



Angolo .....




Angolo .....



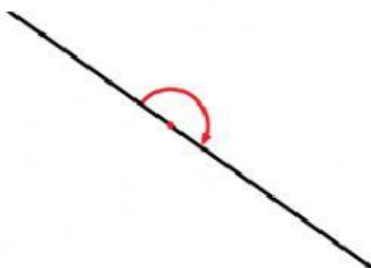
Angolo .....



Angolo .....



Angolo .....



Angolo .....



Angolo .....