




Name: _____ Year: | _____

Fraction

Equal & Unequal

How did you find the questions?

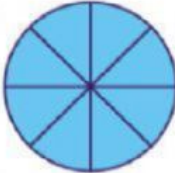
		
Easy	Just right	Hard
<input type="checkbox"/>	<input type="checkbox"/>	<input type="checkbox"/>

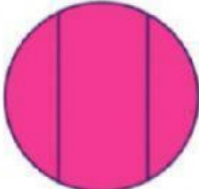
Pick either the shape is equal or unequal. One answer for each question.

A) 

F) 


B) 

G) 

C) 

H) 

D) 

I) 

E) 

J) 