





 ICM	INSAN CEDEKIA MADANI	3D Shapes around You	Name :	
			Class :	
			Teacher :	
			Date :	
<input type="checkbox"/> Pre-assessment <input type="checkbox"/> Individual guided practice <input type="checkbox"/> Independent practice <input type="checkbox"/> Formative Assessment			Marks: 12	Score:

A. Choose the correct name of each shape:

 <input type="checkbox"/> Cylinder <input type="checkbox"/> Cone	 <input type="checkbox"/> Cylinder <input type="checkbox"/> Sphere
 <input type="checkbox"/> Cuboid <input type="checkbox"/> Cube	 <input type="checkbox"/> Cuboid <input type="checkbox"/> Cone
 <input type="checkbox"/> Sphere <input type="checkbox"/> Pyramid	 <input type="checkbox"/> Cylinder <input type="checkbox"/> Cone

B. Choose the correct choice that best describes each object:

 <input type="checkbox"/> Cylinder <input type="checkbox"/> Cone	 <input type="checkbox"/> Cylinder <input type="checkbox"/> Cone
 <input type="checkbox"/> Cone <input type="checkbox"/> Cuboid	 <input type="checkbox"/> Cylinder <input type="checkbox"/> Sphere
 <input type="checkbox"/> Cube <input type="checkbox"/> Cone	 <input type="checkbox"/> Pyramid <input type="checkbox"/> Cylinder