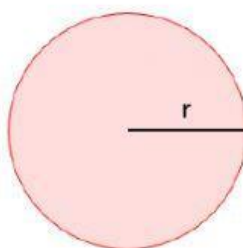


Name: \_\_\_\_\_

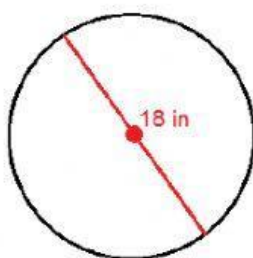
Date: \_\_\_\_\_

Mathematics  
Circumference of a Circle

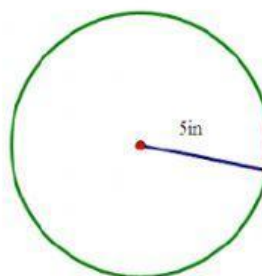


Circumference  
of circle  
 $C = 2\pi r$

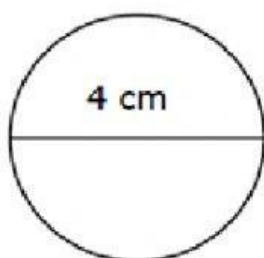
Use the formula to find the circumference of each circle.



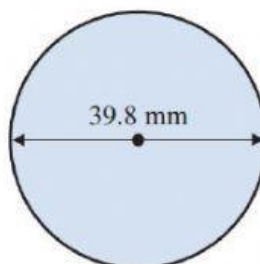
Ans: \_\_\_\_\_



Ans: \_\_\_\_\_



Ans: \_\_\_\_\_



Ans: \_\_\_\_\_

The radius of circle is 2.5 cm long. How long is the diameter?

Ans: \_\_\_\_\_

The diameter of circle is 15 cm long. How long is the radius?

Ans: \_\_\_\_\_

Created by: Ms. A. Bain