

## STRAIGHT LINE AND CURVE LINE

1) Tick (✓) the correct answer.

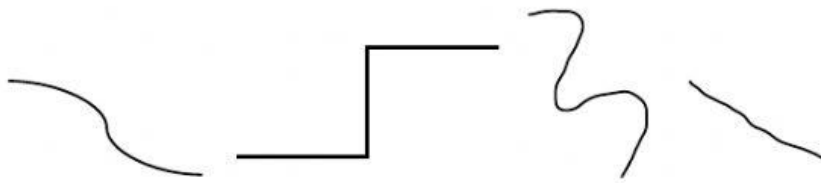
a. These lines are straight line.



Yes ☐

No ☐

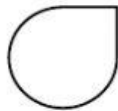


b. These lines are curve lines.




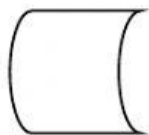

Yes ☐

No ☐

2) Tick (✓) ONLY the curve lines.

☐☐☐☐

3) Tick (✓) ONLY the straight lines.

☐☐☐☐

4) Tick (✓) picture or shape with both straight line and curve line.

