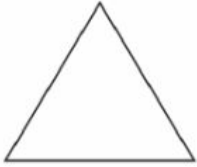


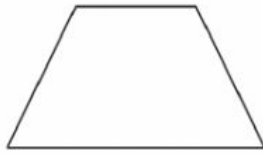
TEST. 2D SHAPES

1.- COMPLETE (in English)



Number of sides _____

Name _____



Number of sides _____

Name _____



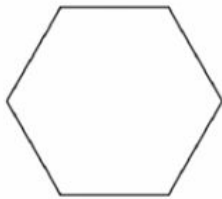
Number of sides _____

Name _____



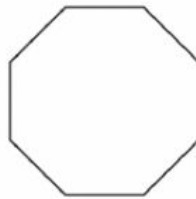
Number of sides _____

Name _____



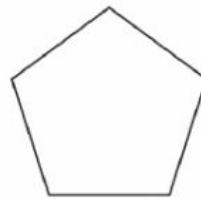
Number of sides _____

Name _____



Number of sides _____

Name _____



Number of sides _____

Name _____

2.- DRAG AND DROP.

ISOSCELES TRIANGLE

SCALENE TRIANGLE

EQUILATERAL TRIANGLE



3.- WRITE THE NAME OF EACH QUADRILATERAL (IN SPANISH):

- Two pairs of parallel sides.

- Just two parallel sides.

- Non parallel sides.