

Name: _____

Subject: Science

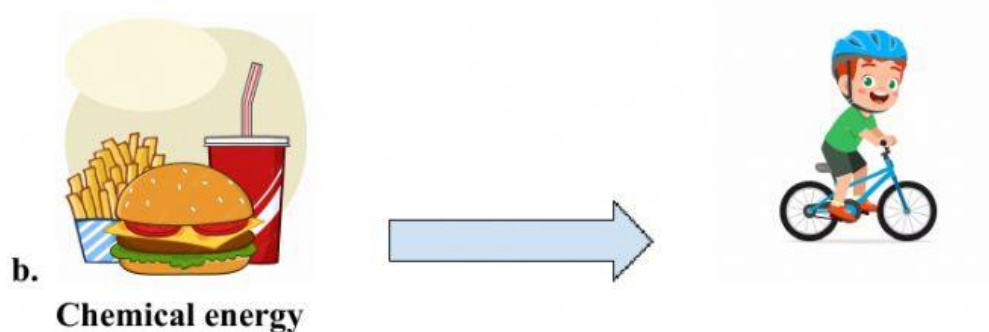
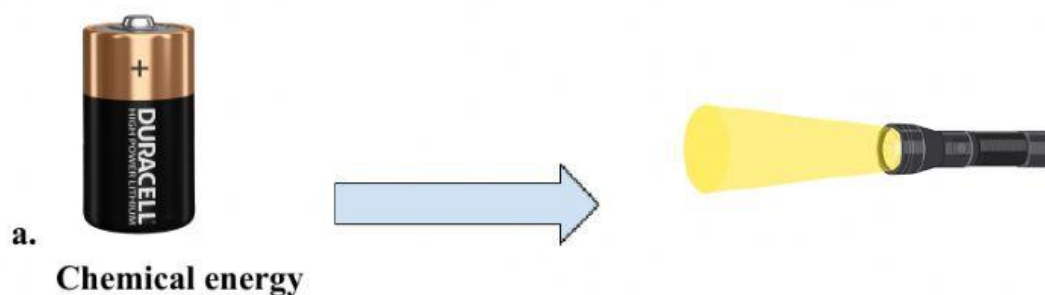
Unit: Energy flow and transformation.

Read each question carefully and answer all the questions.

Choose the correct answer to complete the statement.


1. Energy transformation is _____
2. Energy transfer is _____
3. When energy is transformed the total amount of energy _____ changes.

What energy transformation takes place in each picture shown below.



c.

Electrical energy



d.

Chemical energy

