

Name: _____

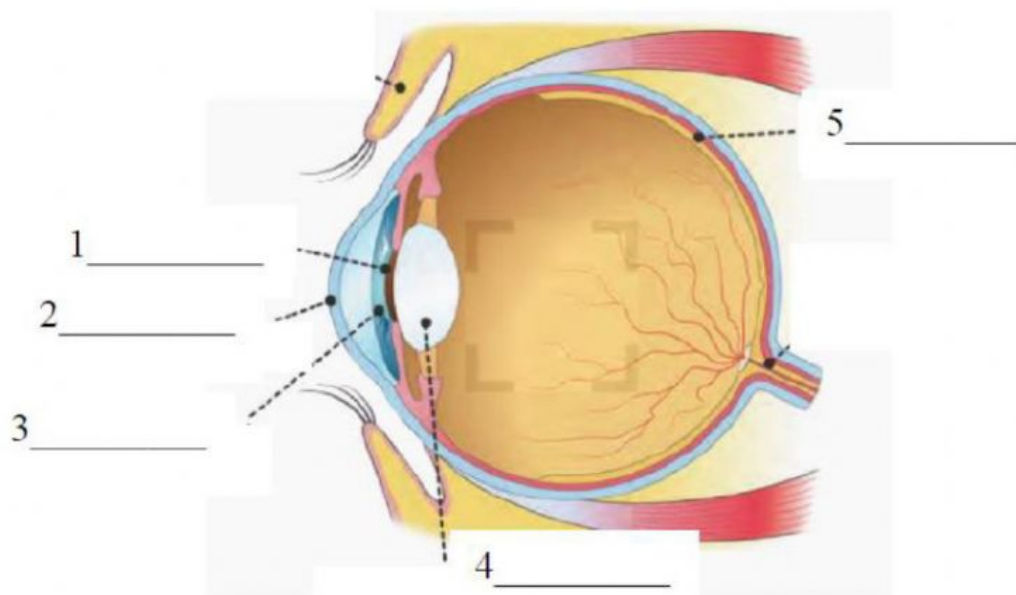
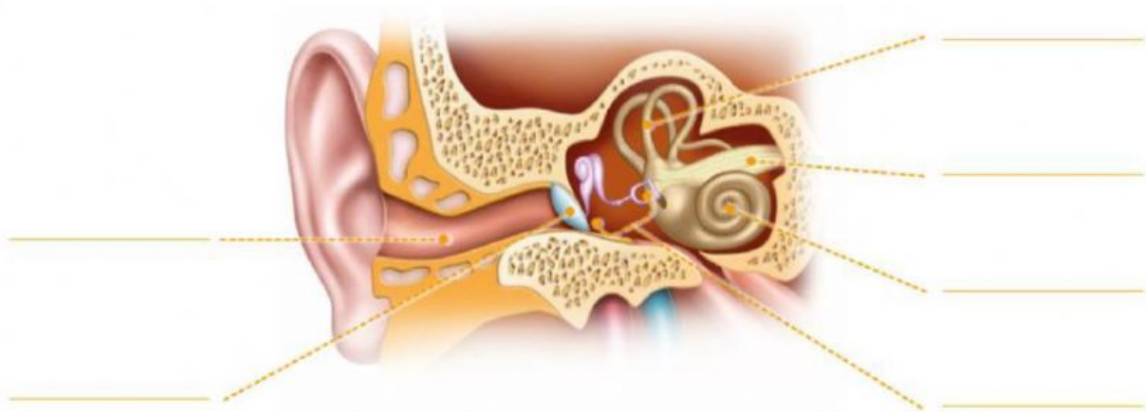
Class: _____



NATURAL SCIENCES

Unit 2: Interaction and Health

1. Label the parts of the ear and the eye. (__/11)



2. Classify the following words in the correct sense. (___/12)

iris • dermis • buds • nostrils • cochlea • cornea • retina
auditory canal • tongue • olfactory nerve • lens • eardrum

sight	
hearing	
smell	
taste	
touch	

3. Correct these sentences by changing the underlined words.
(___/6)

- a The cerebrum protects the brain. _____
- b Examples of voluntary movements are our heartbeat and digestion. _____

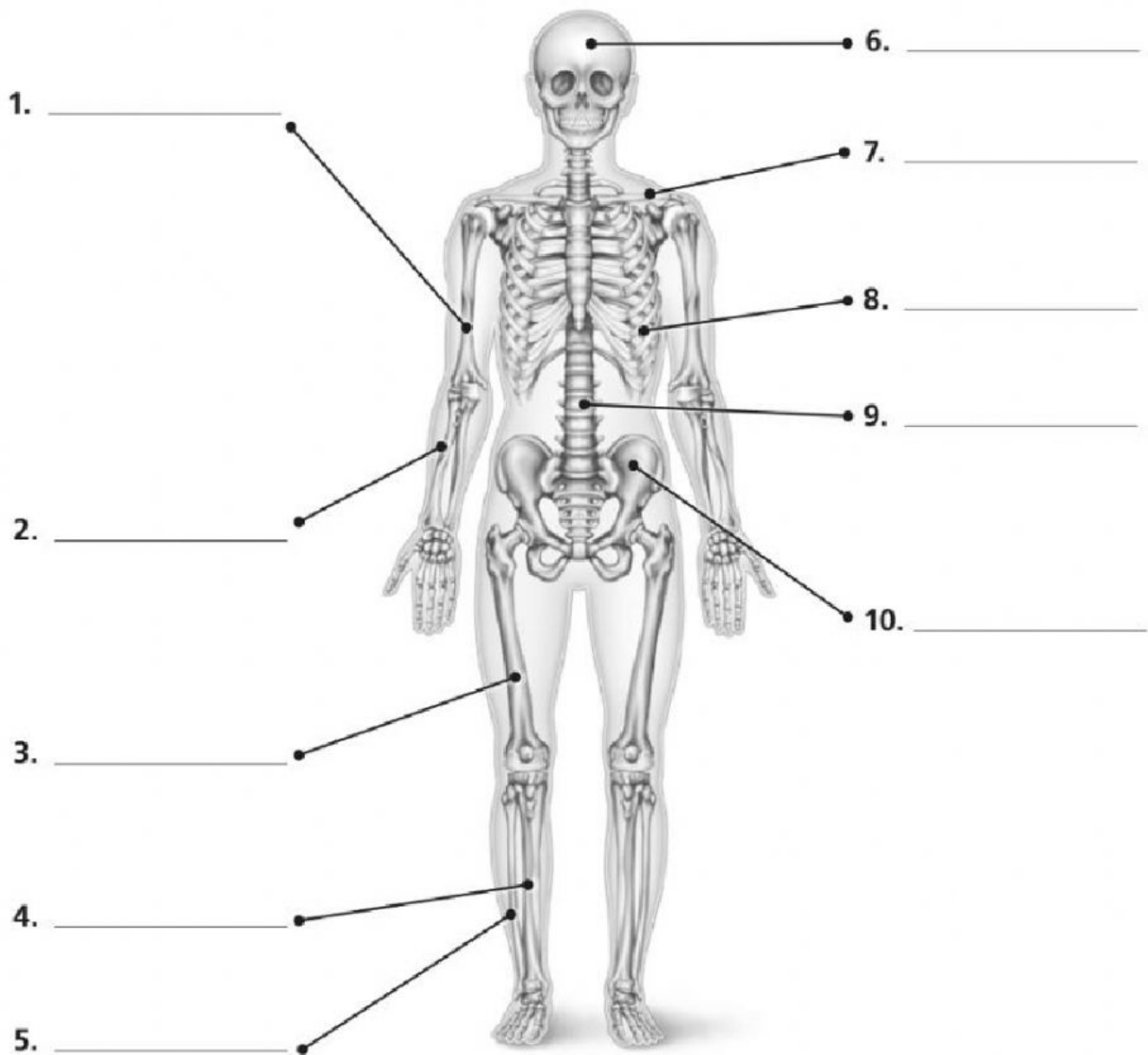
- c Voluntary movements are controlled by the brain stem. _____

- d Balance, movement and coordination are controlled by the skull. _____

- e The spinal cord controls actions such as talking and dancing. _____

- f Motor neurons carry messages from the muscles to the brain. _____

4. Label the bones. (___/10)



5. Match the muscles to the parts of the body where they are located. (___/10)

- | | |
|---------------|------------------------------|
| 1. abdominal | a. in the lower leg |
| 2. biceps | b. in the upper leg |
| 3. calf | c. in the back and neck |
| 4. deltoid | d. in the front of the torso |
| 5. dorsal | e. next to the abdominals |
| 6. frontal | f. in the back |
| 7. oblique | g. in the chest |
| 8. pectoral | h. in the upper arm |
| 9. quadriceps | i. in the forehead |
| 10. trapezius | j. in the shoulder |

6. Complete the definitions in your own words. (___/5)

a. Tendons are ...

b. Ligaments are ...

c. A fracture is ...

d. A sprain is ...

e. A dislocation is when ...
