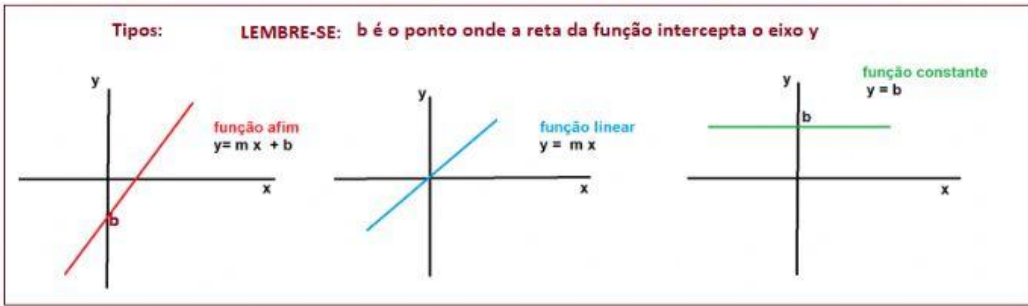
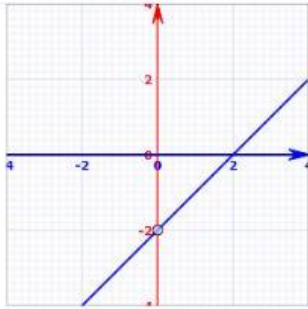


Funções do primeiro grau - Identificação gráfica - Prof. Hipácia

Tipos: LEMBRE-SE: b é o ponto onde a reta da função intercepta o eixo y

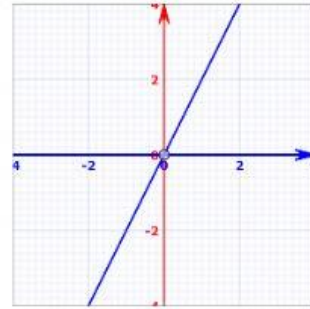


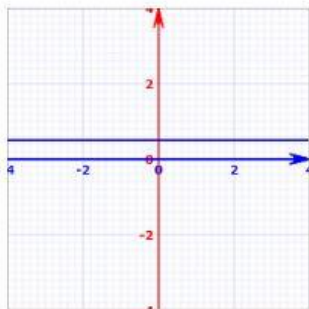
Associe a função ao gráfico correspondente e classifique-a:



$y = 2x - 2$

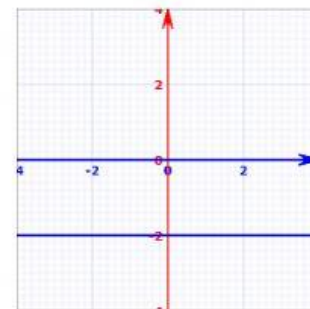
$y = x - 2$



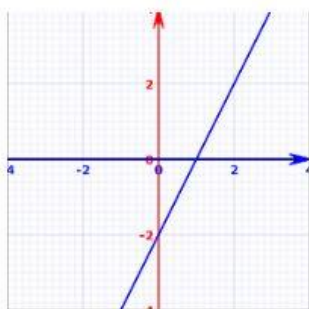


$y = 2x$

$y = -2$



$y = 0.5x + 1$



$y = 0.5$

