


# FRACTION PRACTICE

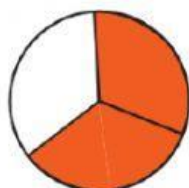
Write the fraction the shaded parts of each shape represent.



$\frac{2}{5}$



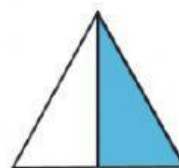
—



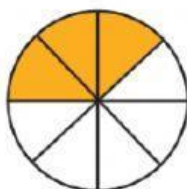
—




—



—




—



—



—



—



—