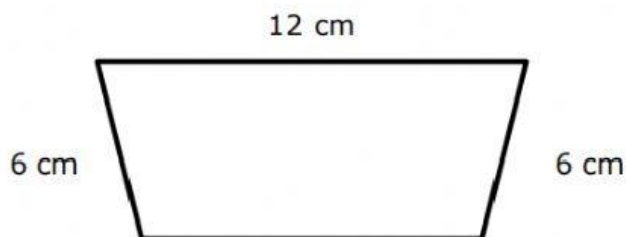


# Perimeter

The lengths of three sides of the trapezoid are shown below.



The perimeter of the trapezoid is 32 centimeters. What is the missing length in centimeters?

- F** 12 cm
- G** 6 cm
- H** 8 cm
- J** 24 cm

**Answer:** \_\_\_\_\_

---

A square has a perimeter of 16 centimeters. What is the length of one side of the square?

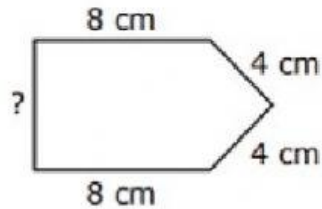
- A** 64 centimeters
- B** 5 centimeters
- C** 4 centimeters
- D** 20 centimeters

**Answer:** \_\_\_\_\_

---

# Perimeter

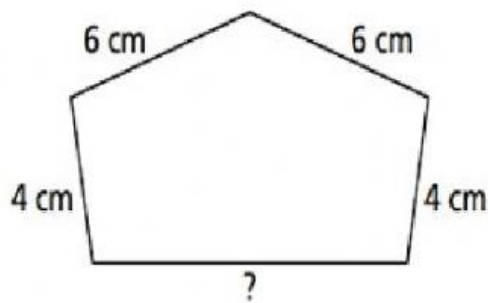
The perimeter of a bookmark is 30 centimeters. What is the missing length, in centimeters, of the last side?



\_\_\_\_\_ cm

---

The perimeter of this shape is 30 centimeters. What is the length of the missing side?



\_\_\_\_\_ cm

---

# Perimeter

A triangular sign has a perimeter of 25 inches. Two sides of the triangle measure 9 inches each. What is the length of the third side in inches?

- A** 7 inches
- B** 9 inches
- C** 14 inches
- D** 16 inches

Answer: \_\_\_\_\_

---