

Escuela de Sophia of Caloocan, Inc.








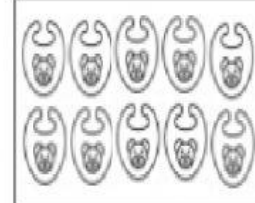
3rd Quarterly Test

KINDER 1 MATH

Name: _____ Raw Score: _____

Kinder 1: _____ Teacher: T. Jhozel/ T.Geyl Parent's Signature: _____


I. Put a check (✓) on the set of objects being asked in each number. (4pts)

<p>1. Which is more?</p> <div></div> <div></div>	<p>3. Which is less?</p> <div></div> <div></div>
<p>2. Which is more?</p> <div></div> <div></div>	<p>4. Which is less?</p> <div></div> <div></div>




II. Draw a line to match the following number words to their correct numerals. (5pts)

5.	zero	•	2
6.	ten	•	3
7.	two	•	9
8.	three	•	0
9.	nine	•	10


III. Look at the objects below from left to right. (6pts)



a. Color the correct ordinal number of the given shapes on the left.

10. 	2nd	3rd
11. 	10th	6th
12. 	4th	5th
13. 	1st	7th

b. Draw the shape being asked.



14. What shape is in the 3rd position?	16. What shape is in the 10th position?
15. What shape is in the 1st position?	17. What shape is in the 8th position?

IV. Compare the following numbers using the symbols $>$, $<$, or $=$. Write your answer inside the circle. (6pts)

18. 6 ○ 3	21. 7 ○ 7
19. 1 ○ 8	22. 3 ○ 4
20. 2 ○ 9	23. 7 ○ 1

V. Write the correct number word of the following numerals. (3pts)

24. <div style="border: 1px solid black; padding: 5px; display: inline-block;">6</div> _____ _____ _____	25. <div style="border: 1px solid black; padding: 5px; display: inline-block;">7</div> _____ _____ _____	26. <div style="border: 1px solid black; padding: 5px; display: inline-block;">5</div> _____ _____ _____
---	---	---

VI. Arrange the following numbers. Write your answer inside the box.

A. greatest to least (2 pts.)

27. <div style="display: inline-block; border: 1px solid black; border-radius: 50%; padding: 10px; margin: 2px;">2</div> <div style="display: inline-block; border: 1px solid black; border-radius: 50%; padding: 10px; margin: 2px;">4</div> <div style="display: inline-block; border: 1px solid black; border-radius: 50%; padding: 10px; margin: 2px;">3</div> <div style="display: inline-block; border: 1px solid black; width: 40px; height: 40px; margin: 2px;"></div> <div style="display: inline-block; border: 1px solid black; width: 40px; height: 40px; margin: 2px;"></div> <div style="display: inline-block; border: 1px solid black; width: 40px; height: 40px; margin: 2px;"></div>
28. <div style="display: inline-block; border: 1px solid black; border-radius: 50%; padding: 10px; margin: 2px;">6</div> <div style="display: inline-block; border: 1px solid black; border-radius: 50%; padding: 10px; margin: 2px;">10</div> <div style="display: inline-block; border: 1px solid black; border-radius: 50%; padding: 10px; margin: 2px;">5</div> <div style="display: inline-block; border: 1px solid black; width: 40px; height: 40px; margin: 2px;"></div> <div style="display: inline-block; border: 1px solid black; width: 40px; height: 40px; margin: 2px;"></div> <div style="display: inline-block; border: 1px solid black; width: 40px; height: 40px; margin: 2px;"></div>

B. least to greatest (2 pts.)

29. <div style="display: inline-block; border: 1px solid black; border-radius: 50%; padding: 10px; margin: 2px;">9</div> <div style="display: inline-block; border: 1px solid black; border-radius: 50%; padding: 10px; margin: 2px;">5</div> <div style="display: inline-block; border: 1px solid black; border-radius: 50%; padding: 10px; margin: 2px;">3</div> <div style="display: inline-block; border: 1px solid black; width: 40px; height: 40px; margin: 2px;"></div> <div style="display: inline-block; border: 1px solid black; width: 40px; height: 40px; margin: 2px;"></div> <div style="display: inline-block; border: 1px solid black; width: 40px; height: 40px; margin: 2px;"></div>
30. <div style="display: inline-block; border: 1px solid black; border-radius: 50%; padding: 10px; margin: 2px;">8</div> <div style="display: inline-block; border: 1px solid black; border-radius: 50%; padding: 10px; margin: 2px;">2</div> <div style="display: inline-block; border: 1px solid black; border-radius: 50%; padding: 10px; margin: 2px;">4</div> <div style="display: inline-block; border: 1px solid black; width: 40px; height: 40px; margin: 2px;"></div> <div style="display: inline-block; border: 1px solid black; width: 40px; height: 40px; margin: 2px;"></div> <div style="display: inline-block; border: 1px solid black; width: 40px; height: 40px; margin: 2px;"></div>