









Scrivi prima la frazione che corrisponde alla parte colorata e poi la sua frazione complementare.

RAPPRESENTAZIONE DELLA FRAZIONE	FRAZIONE DATA	FRAZIONE COMPLEMENTARE
	$\frac{\quad}{\quad}$	$\frac{\quad}{\quad}$
	$\frac{\quad}{\quad}$	$\frac{\quad}{\quad}$
	$\frac{\quad}{\quad}$	$\frac{\quad}{\quad}$
	$\frac{\quad}{\quad}$	$\frac{\quad}{\quad}$
	$\frac{\quad}{\quad}$	$\frac{\quad}{\quad}$
	$\frac{\quad}{\quad}$	$\frac{\quad}{\quad}$
	$\frac{\quad}{\quad}$	$\frac{\quad}{\quad}$
	$\frac{\quad}{\quad}$	$\frac{\quad}{\quad}$