
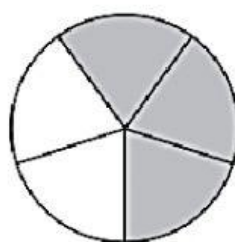


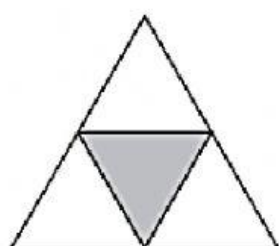
- **Scrivi la frazione che corrisponde alla parte colorata e alla parte bianca. Infine scrivi a quale frazione corrisponde l'intero.**



$$\frac{4}{9} + \frac{5}{9} = \frac{9}{9} = 1$$



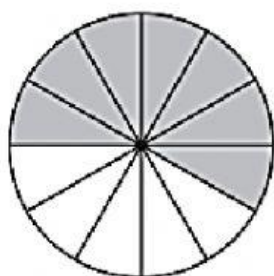
$$\frac{3}{5} + \frac{2}{5} = \frac{5}{5} = 1$$



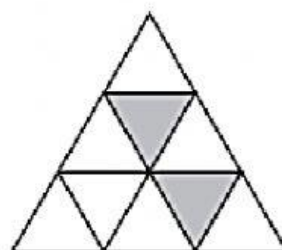
$$\frac{1}{4} + \frac{3}{4} = \frac{4}{4} = 1$$




$$\frac{3}{6} + \frac{3}{6} = \frac{6}{6} = 1$$



$$\frac{5}{10} + \frac{5}{10} = \frac{10}{10} = 1$$



$$\frac{3}{9} + \frac{6}{9} = \frac{9}{9} = 1$$



$$\frac{1}{3} + \frac{2}{3} = \frac{3}{3} = 1$$



$$\frac{4}{5} + \frac{1}{5} = \frac{5}{5} = 1$$