

# LEMBAR KERJA SISWA

Nama : .....

Kelas : .....



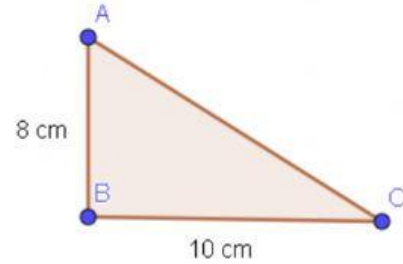
## LUAS SEGITIGA

Hitunglah luas segitiga dan pilihlah jawaban yang tepat a, b, c atau d !



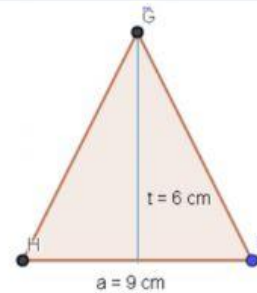
1

- a.  $30 \text{ cm}^2$
- b.  $35 \text{ cm}^2$
- c.  $40 \text{ cm}^2$
- d.  $45 \text{ cm}^2$

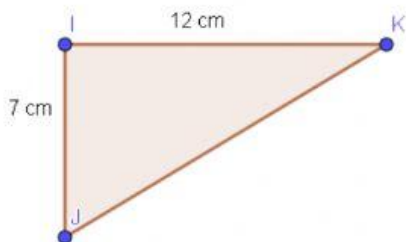


2

- a.  $25 \text{ cm}^2$
- b.  $27 \text{ cm}^2$
- c.  $54 \text{ cm}^2$
- d.  $45 \text{ cm}^2$

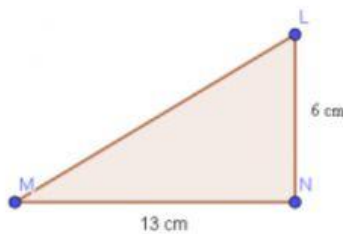


3



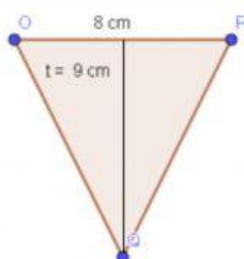
- a.  $42 \text{ cm}^2$
- b.  $40 \text{ cm}^2$
- c.  $84 \text{ cm}^2$
- d.  $80 \text{ cm}^2$

4



- a.  $26 \text{ cm}^2$
- b.  $39 \text{ cm}^2$
- c.  $45 \text{ cm}^2$
- d.  $78 \text{ cm}^2$

5



- a.  $72 \text{ cm}^2$
- b.  $56 \text{ cm}^2$
- c.  $46 \text{ cm}^2$
- d.  $36 \text{ cm}^2$