










- I. Classify the following rocks according to their groups (Sedimentary, Igneous and Metamorphic).

 <p>Limestone</p>	 <p>Slate</p>	 <p>Granite</p>
1.	2.	3.
 <p>Quartzite</p>	 <p>Shale</p>	 <p>Gneiss</p>
4.	5.	6.
 <p>Marble</p>	 <p>Basalt</p>	 <p>Type of rocks where Fossils are commonly found?</p>
7.	8.	9.

II. Write the numbers (1-10) 1 as the hardest and 10 as the softest mineral.



Talc



Calcite



Topaz



Feldspar



Diamond



Gypsum



Quartz



Fluorite



Corundum



Apatite