

**Match the money to their numerical form.**

**\$50.00**



**\$10.00**



**\$1.00**



**\$5.00**



**\$1000.00**



**\$500.00**



**\$20.00**





**\$100.00**



**\$5000.00**





**Answer each question.**

1. How many  can I get from  ?



I can get \_\_\_\_\_.

2. How many  can I get from  ?



I can get \_\_\_\_\_.

3. How many  can I get from  ?



I can get \_\_\_\_\_.

4. How many  can I get from  ?



I can get \_\_\_\_\_.

5. How many  can I get from  ?

I can get \_\_\_\_\_.

6. How many  can I get from  ?

I can get \_\_\_\_\_.

7. How many  can I get from  ?

I can get \_\_\_\_\_.