

How Does the Biosphere Affect the Environment?



Name: _____

Date: _____

Class: _____

1. Do the following images represent parts of the biosphere?
Write the word 'yes' or 'no' below each picture to show where living things are found.

Under Water	In the Sky
	
<input type="text"/>	<input type="text"/>
Outer Space	A City
	
<input type="text"/>	<input type="text"/>





Name: _____ Date: _____ Class: _____

2. Classify each of the actions below as the conservation of or a threat to natural resources. Drag the pictures to place them under the correct side of the table.

				
cutting down trees	riding a bicycle	recycling wastes	spilling oil in the ocean	turning off lights not in use

Conservation of Resources	Threat to Resources








Name: _____

Date: _____

Class: _____

3. Read the description of each species, and mark its status as: endangered, not endangered, or extinct.

Species	Description	Endangered, Not endangered, or Extinct?
 <p>Siberian tiger</p>	less than 500 are still alive in Russia and Asia	<input type="checkbox"/> endangered <input type="checkbox"/> not endangered <input type="checkbox"/> extinct
 <p>Cows</p>	more than 1 billion exist in the world	<input type="checkbox"/> endangered <input type="checkbox"/> not endangered <input type="checkbox"/> extinct
 <p>Woolly mammoth</p>	last seen on Earth about 10,000 years ago; no longer alive	<input type="checkbox"/> endangered <input type="checkbox"/> not endangered <input type="checkbox"/> extinct

