

1. Identify the names of the cyclones.

Name.....

classroom.....Number.....

Typhoon , Tropical storm , Hurricane ,Tropical depression.

1. A cyclone with a wind speed of 120 km/h.....
2. Cyclone Nargis with a wind speed of 210 km/h.....
3. A cyclone with a wind speed of 90 km/h.....
4. A cyclone with a reduced wind speed that becomes a low-pressure area
5. A cyclone that forms in the North Atlantic Ocean, the Caribbean Sea, and the Gulf of Mexico.....

2. Match the words with the pictures (weather forecast)

wind vane

Anemometer

Aneroid Barometer


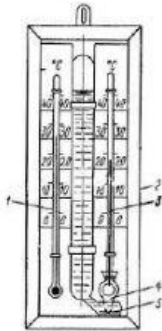
Altimeter

Aerovane

Psychrometers

raingauge

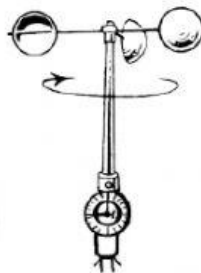
Thermometers



1.....

2.....

3.....



4.....

5.....

6.....