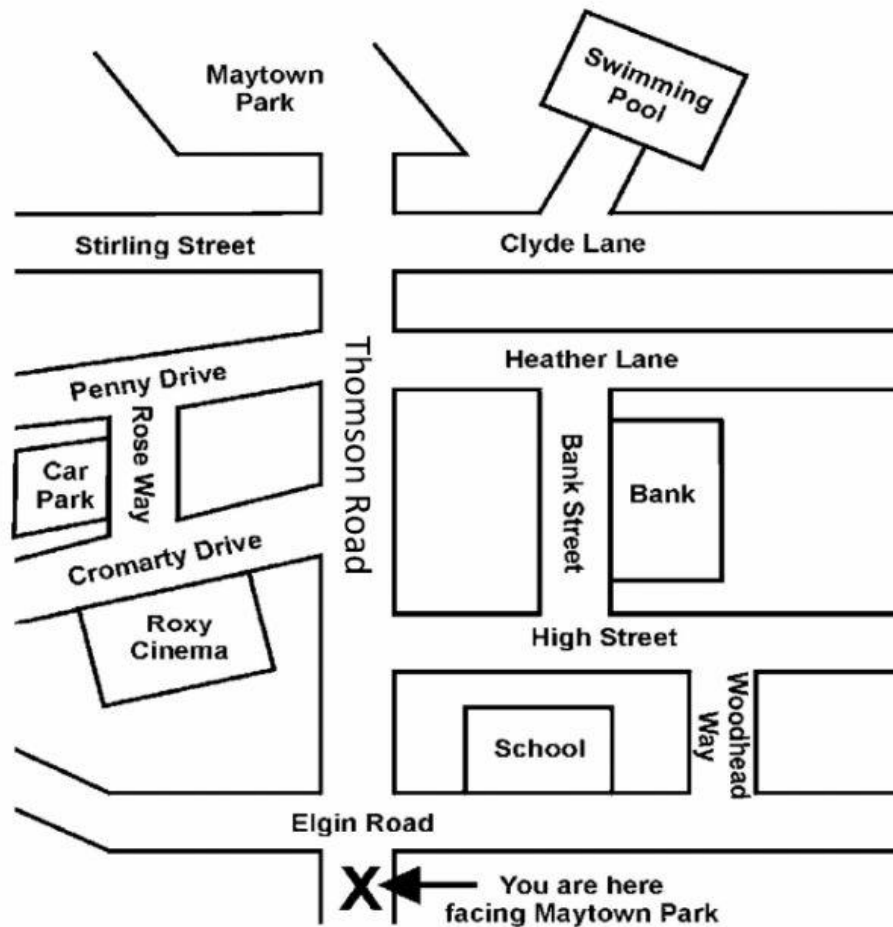


# Directions

## Exercise 1

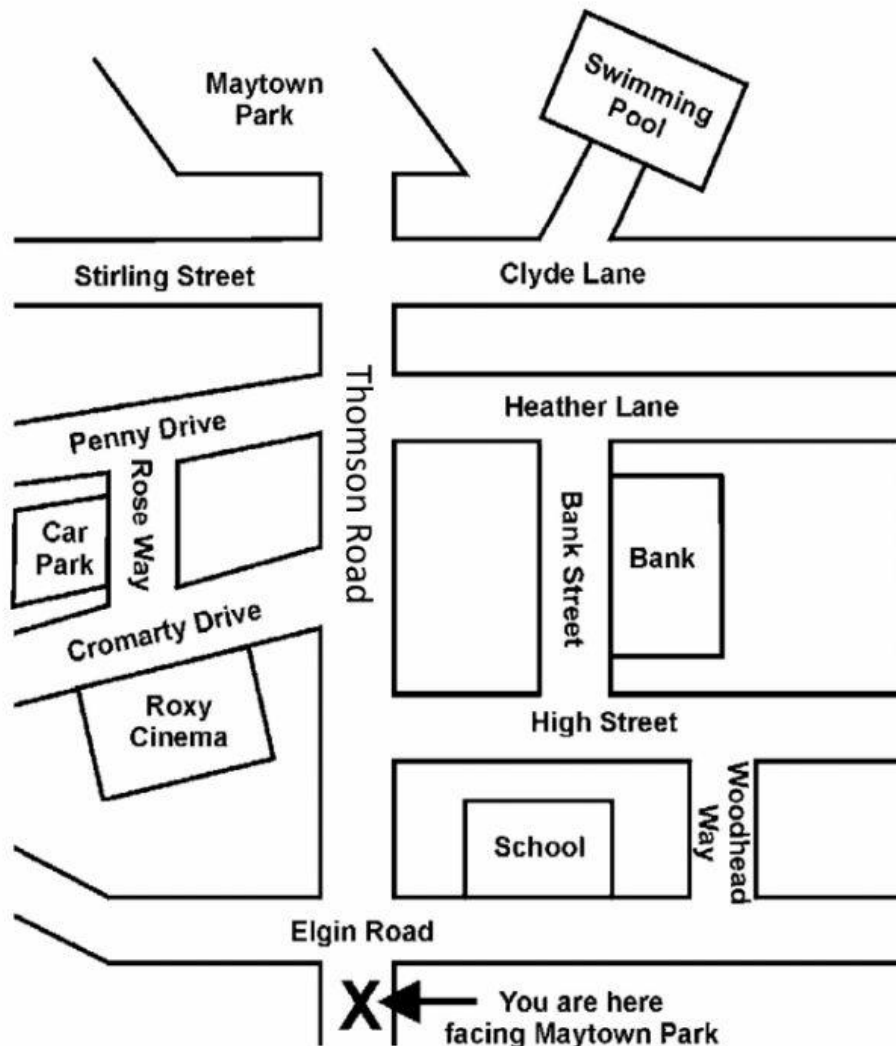


- 1 Look at the map above. Imagine you are standing at 'X'.
  - a) Which road leads to Maytown Park?
  - b) Which road is second on the left?
  - c) Which road is first on the left?
  - d) Which road is third on the right?
  - e) Which road is first on the right?
  - f) Where will you be if you take the second turning on the right and then the first on the left?
  - g) Where will you be if you take the first turning on the right and then the on the left?
  - h) Where will you be if you take the second turning on the left and then the first on the right?

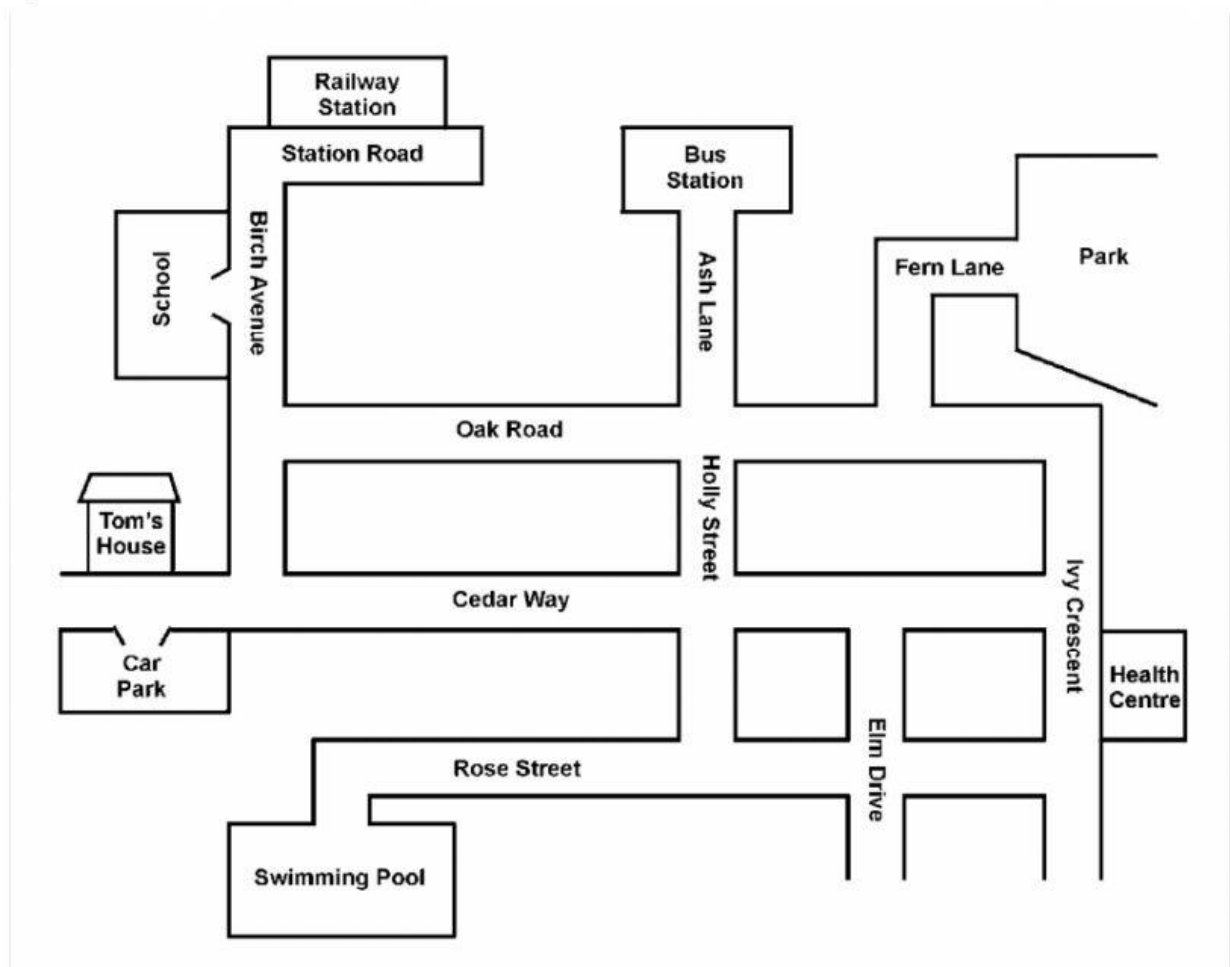
2 Look at the map below. Imagine you are at 'X'.

Give directions to the bank.

Give directions to the Roxy Cinema.



- 3 Use the map of Newbury town centre to answer each of the following questions :



- a) Jim comes out of the school gate and turns right.

He walks to the end of Birch Avenue and turns left into Cedar Way.  
Then he turns into the first street on the right.

What is the name of this street?

- b) Anna leaves the bus station and walks down Ash Lane.

She takes the third turning on the left followed by the second turn on the right.

What street is Anna now in?

c) Tom lives in Cedar Way opposite the car park.

He works at the swimming pool.

Describe the route Tom would walk each day to get from his house to the swimming pool.

d) Robin is at the bus station.

He wants to get to the Health Centre.

Describe the route he should take from the bus station to the Health Centre.

- 4 Andrew arrives at the main entrance to your school and asks for directions to each of the following places. Write down the instructions you would give him.

**Always start from the front door.**

the Headteacher's office

your English classroom