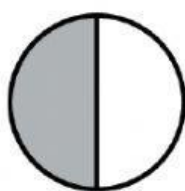

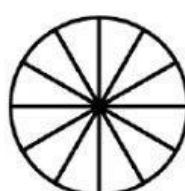



Escribe los signos  $>$ ,  $<$  o  $=$  según corresponda.



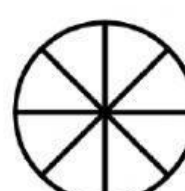

$$\frac{1}{2} > \frac{1}{3}$$





$$\frac{6}{12} \square \frac{2}{4}$$





$$\frac{2}{4} \square \frac{2}{3}$$



$$\frac{3}{12} \square \frac{2}{8}$$



$$\frac{1}{2} \square \frac{2}{4}$$



$$\frac{1}{4} \square \frac{1}{5}$$