

POTENCIAS

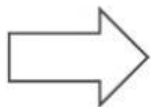
Visualiza el video y completa el esquema:

Una potencia es compactar _____ de números

_____.

$(+2)^4 =$	$=$
$(+2)^5 =$	$=$

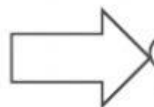
Base POSITIVA



$(-2)^4 =$	$=$
------------	-----

Base NEGATIVA


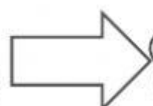
Exponente PAR



$(-2)^5 =$	$=$
------------	-----

Base NEGATIVA

Exponente IMPAR



$$(-2)^4 \neq -2^4$$

$(-2)^4 =$	$=$
------------	-----

$-2^4 =$	$=$
----------	-----