







## Activity 5



Ahmed and Mariam have collected all their **batteries**.  
They want to **match** the **battery** with its **current capacity**.  
Help them to complete the activity below.

Device	Battery name
<b>Wall clock</b> 2 batteries 1.5V and 2.4A 	Coin cell
<b>Calculator</b> 1 battery 3V and 0.25A 	AAA
<b>Flashlight</b> 1 battery 1.5V and 8A 	AA
<b>Scale</b> 2 batteries 1.5V and 1.2A 	C