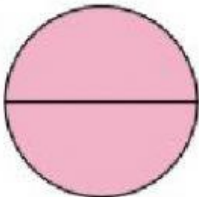
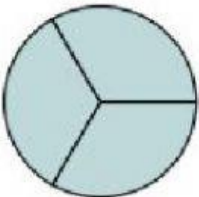
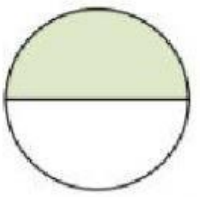
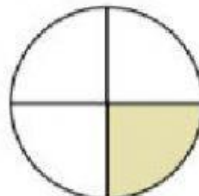

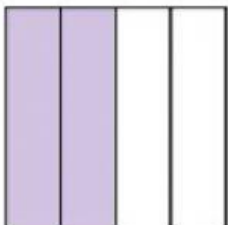
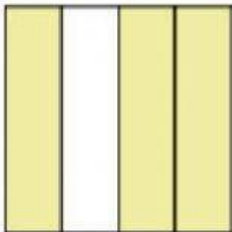
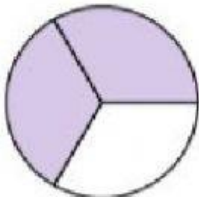
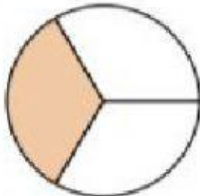
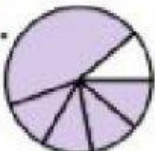

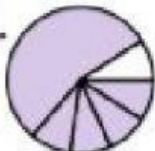
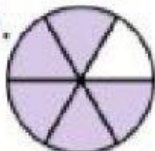


FRAZIONI

INDIVIDUA LA FRAZIONE E SCRIVI LA PARTE COLORATA A QUANTO CORRISPONDE

 <p>A. due mezzi B. un quarto C. due quarti</p>	<p>SCRIVI LA FRAZIONE IN NUMERO</p> <div style="border: 1px solid black; width: 60px; height: 40px; margin: 5px auto; position: relative;"> <div style="position: absolute; top: 50%; left: 50%; transform: translate(-50%, -50%); border-top: 1px solid black; border-bottom: 1px solid black; width: 100%; height: 2px;"></div> </div>	 <p>A. due quarti B. tre terzi C. un quarto</p>	<p>SCRIVI LA FRAZIONE IN NUMERO</p> <div style="border: 1px solid black; width: 60px; height: 40px; margin: 5px auto; position: relative;"> <div style="position: absolute; top: 50%; left: 50%; transform: translate(-50%, -50%); border-top: 1px solid black; border-bottom: 1px solid black; width: 100%; height: 2px;"></div> </div>	 <p>A. due terzi B. un mezzo C. tre quarti</p>	<p>SCRIVI LA FRAZIONE IN NUMERO</p> <div style="border: 1px solid black; width: 60px; height: 40px; margin: 5px auto; position: relative;"> <div style="position: absolute; top: 50%; left: 50%; transform: translate(-50%, -50%); border-top: 1px solid black; border-bottom: 1px solid black; width: 100%; height: 2px;"></div> </div>
 <p>A. tre quarti B. due terzi C. un quarto</p>	<p>SCRIVI LA FRAZIONE IN NUMERO</p> <div style="border: 1px solid black; width: 60px; height: 40px; margin: 5px auto; position: relative;"> <div style="position: absolute; top: 50%; left: 50%; transform: translate(-50%, -50%); border-top: 1px solid black; border-bottom: 1px solid black; width: 100%; height: 2px;"></div> </div>	 <p>A. tre quarti B. quattro quarti C. due quarti</p>	<p>SCRIVI LA FRAZIONE IN NUMERO</p> <div style="border: 1px solid black; width: 60px; height: 40px; margin: 5px auto; position: relative;"> <div style="position: absolute; top: 50%; left: 50%; transform: translate(-50%, -50%); border-top: 1px solid black; border-bottom: 1px solid black; width: 100%; height: 2px;"></div> </div>	 <p>A. due quarti B. quattro quarti C. due terzi</p>	<p>SCRIVI LA FRAZIONE IN NUMERO</p> <div style="border: 1px solid black; width: 60px; height: 40px; margin: 5px auto; position: relative;"> <div style="position: absolute; top: 50%; left: 50%; transform: translate(-50%, -50%); border-top: 1px solid black; border-bottom: 1px solid black; width: 100%; height: 2px;"></div> </div>
 <p>A. quattro quarti B. tre quarti C. un mezzo</p>	<p>SCRIVI LA FRAZIONE IN NUMERO</p> <div style="border: 1px solid black; width: 60px; height: 40px; margin: 5px auto; position: relative;"> <div style="position: absolute; top: 50%; left: 50%; transform: translate(-50%, -50%); border-top: 1px solid black; border-bottom: 1px solid black; width: 100%; height: 2px;"></div> </div>	 <p>A. due terzi B. due mezzi C. quattro quarti</p>	<p>SCRIVI LA FRAZIONE IN NUMERO</p> <div style="border: 1px solid black; width: 60px; height: 40px; margin: 5px auto; position: relative;"> <div style="position: absolute; top: 50%; left: 50%; transform: translate(-50%, -50%); border-top: 1px solid black; border-bottom: 1px solid black; width: 100%; height: 2px;"></div> </div>	 <p>A. un mezzo B. un quarto C. un terzo</p>	<p>SCRIVI LA FRAZIONE IN NUMERO</p> <div style="border: 1px solid black; width: 60px; height: 40px; margin: 5px auto; position: relative;"> <div style="position: absolute; top: 50%; left: 50%; transform: translate(-50%, -50%); border-top: 1px solid black; border-bottom: 1px solid black; width: 100%; height: 2px;"></div> </div>
<p>Quale di queste frazioni rappresenta $\frac{5}{6}$</p>					
<div style="display: flex; justify-content: space-around; align-items: flex-end;"> <div style="text-align: center;"> <p>A.</p>  </div> <div style="text-align: center;"> <p>B.</p>  </div> <div style="text-align: center;"> <p>C.</p>  </div> <div style="text-align: center;"> <p>D.</p>  </div> </div>					

AUTOVALUTAZIONE

CLICCA SULLA STELLA

GRADIMENTO: ti è piaciuta l'attività che hai svolto?




MOLTO



ABBASTANZA



POCO



PER NULLA

COME TI È SEMBRATA L'ATTIVITÀ?



MOLTO FACILE



FACILE



UN PO' DIFFICILE



MOLTO DIFFICILE

COME PENSI AVER LAVORATO?



MOLTO BENE



BENE



UN PO' BENE



MALE

DESCRIVI A PAROLE TUE COSA HAI TROVATO DIFFICILE E COME LO HAI SUPERATO

CHE VOTO TI DARESTI DA 1 A 10?

NOME:

MAESTRA FRANCESCA