

## Exercise 3 – Timetables

1 Here is part of a bus timetable.

<b>Stonehouse</b>	<b>0900</b>
<b>Larkhall</b>	<b>0915</b>
<b>Hamilton</b>	<b>0940</b>

- a What time does the bus leave Stonehouse?
- b What time does the bus arrive at Larkhall?
- c How long is the journey from Stonehouse to Larkhall?
- d What time does the bus arrive in Hamilton?
- e How long was the journey from Larkhall to Hamilton?

2 Here is part of a train timetable.

- a What time does the train leave Larkhall?
- b What time does the train arrive at Rutherglen?
- c How long is the journey from Larkhall to Rutherglen?
- d What time does the Train arrive in Glasgow?

<b>Larkhall</b>	<b>1010</b>
<b>Hamilton</b>	<b>1017</b>
<b>Rutherglen</b>	<b>1031</b>
<b>Glasgow Central</b>	<b>1050</b>
<b>SECC</b>	<b>1105</b>

- e How long was the journey from Larkhall to SECC?

**3** Here is part of a train timetable.

**a** What time does the train 1 leave Hamilton?

**b** What time does the train 2 arrive at Partick?

**c** How long is the journey from Motherwell to Hamilton?

	Train 1	Train 2
<b><i>Motherwell</i></b>	<b>0832</b>	<b>1002</b>
<b><i>Hamilton</i></b>	<b>0842</b>	<b>1012</b>
<b><i>Blantyre</i></b>	<b>0847</b>	<b>???</b>
<b><i>Glasgow</i></b>	<b>0905</b>	<b>1035</b>
<b><i>Partick</i></b>	<b>0912</b>	<b>???</b>

**d** How long is the journey from Hamilton to Blantyre?

**e** What time does the train2 arrive in Blantyre?

**f** How long is the journey from Glasgow to Partick?

**e** What time does the train2 arrive in Partick?

Question 4 is below

4 Here is part of a train timetable.

Monday to Friday					
		A	B	C	D
Glasgow	(d)	07:15	09:40	12:30	15:25
Lanark	(d)	07:45	--:--	13:00	--:--
Newcastle	(d)	09:30	10:50	15:15	16:35
Birmingham	(d)	11:40	13:00	17:25	18:45
London	(a)	13:15	14:35	18:00	20:20

- a When does train C leave Glasgow ?
- b Anne wants to travel from Glasgow to Newcastle.  
She wants to leave Glasgow in the afternoon.  
Which two trains could Anne travel on?
- c When does the 09 40 train get to London?
- d Frank lives in Lanark.  
He wants to get a train from Lanark to Birmingham.  
Which trains could he get?
- e Simon arrives at Birmingham station at 17 05.  
When is the next train to London?

- 5 Here are timetables giving information on travelling from London to Jersey and back, by train and by ferry.

London-Jersey		
20 30	dep	London (Waterloo)
21 16	dep	Basingstoke
21 42	dep	Southampton
22 25	dep	Bournemouth
23 30	arr	Weymouth Quay
00 15	dep	Weymouth Quay
05 45	arr	Jersey

Jersey-London		
Jersey	dep	23 40
Weymouth Quay	arr	05 10
Weymouth Quay	dep	05 55
Bournemouth	arr	07 00
Southampton	arr	07 43
Basingstoke	arr	08 19
London (Waterloo)	arr	09 05

Use the timetables to answer the following questions:

- a When does the train leave London?
- b
  - i) When does the train arrive in Weymouth?
  - ii) When does the ferry leave Weymouth?
- c When does the ferry arrive in Jersey?
- d When does the ferry leave Jersey to travel to Weymouth?
- e How long does it take for the train to travel from Bournemouth to London?





- 6** Here is a bus timetable for journeys between Aberdeen and Glasgow.  
The timetable uses the 24 hour clock.

	<b>A</b>	<b>B</b>	<b>C</b>	<b>D</b>
<b>Aberdeen</b>	09 00	11 18	14 41	18 05
<b>Dundee</b>	10 20	12 38	16 03	19 25
<b>Perth</b>	10 42	13 00	16 25	19 47
<b>Stirling</b>	11 17	13 32	16 58	20 19
<b>Glasgow</b>	11 48	14 03	17 35	20 50

- a** Which buses leave Aberdeen in the morning?
- b** Which buses arrive in Glasgow after 2 pm?
- c** Which bus leaves Perth at 1.00 pm?
- d** Which bus arrives in Glasgow at twenty five to six?
- e** You get to the bus station in Perth at 10.30 am.  
When is the next bus to Glasgow?
- f** i) How long does the 9 o'clock bus take to travel from Aberdeen to Glasgow?  
ii) How long does the last bus take to travel from Aberdeen to Glasgow?  
iii) Which of these two buses takes longer to complete the journey?  
iv) How much longer does it take?

- 7 a Jack is going to the theatre this Friday. The show is on Shaftesbury Avenue. He lives in Romford, and will get the train to Liverpool Street. It will take him 30 minutes to get to Shaftesbury Avenue from Liverpool Street station.  
The show begins at 7.30pm.



Romford.....	1754	1758	1814	1818	1824	1828	1828	1834	1838
Chadwell Heath .....		1802		1822		1832			1842
Goodmayes .....		1804		1824		1834			1844
Seven Kings .....		1806		1826		1836			1846
Ilford .....	1802	1809	1822	1829	1832	1839		1842	1849
Manor Park.....	1805		1825		1835			1845	1852
Forest Gate .....	1807		1827		1837			1847	1854
Maryland.....	1809		1829		1839			1849	1856
Stratford  .....	1812	1815	1832	1835	1842	1845	1836	1852	1859
<b>London Liverpool St. </b>	<b>1820</b>	<b>1823</b>	<b>1840</b>	<b>1843</b>	<b>1850</b>	<b>1853</b>	<b>1845</b>	<b>1900</b>	<b>1907</b>

It takes him 15 minutes to get to Romford station.

In your jotter, plan a schedule by copying and completing the table below.

	Time
<b>Leave home.</b>	
<b>Train departs Romford.</b>	
<b>Train arrives Liverpool St.</b>	
<b>Arrive at Shaftesbury Ave.</b>	

- 7 c It's 10pm, the show is finished and he has to get home. He doesn't want to walk back to Liverpool St, and decides to get a cab. The taxi will take about 10 mins to get there from Shaftesbury Ave. What time might he be expected home?

<b>London Liverpool St.</b> 	2205	2213	2220	2235	2250	2305
Stratford <b>DLR</b> 	2212	2220	2227	2242	2257	2312
Maryland.....	2214		2229	2244	2259	2314
Forest Gate .....	2216		2231	2246	2301	2316
Manor Park.....	2218		2233	2248	2303	2318
Ilford .....	2221		2236	2251	2306	2321
Seven Kings .....	2223		2238	2253	2308	2323
Goodmayes .....	2225		2240	2255	2310	2325
Chadwell Heath .....	2227		2242	2257	2312	2327
Romford.....	2231	2228	2246	2301	2316	2331

Remember, it takes him 15 minutes to get home from Romford station.

In your jotter, plan a schedule for me by copying and completing the table below.

	Time
<b>Leave the theatre.</b>	
<b>Arrive at Liverpool St.</b>	
<b>Train departs Liverpool St.</b>	
<b>Train arrives Romford.</b>	
<b>Arrive home.</b>	