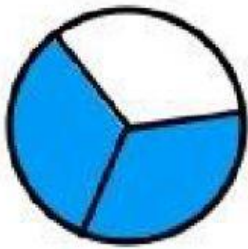
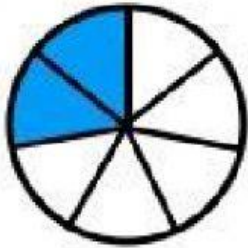


Nombre: _____ Curso: _____ Fecha: _____

Fracciones



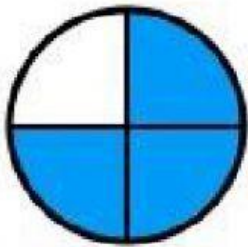
$$\frac{1}{4}$$



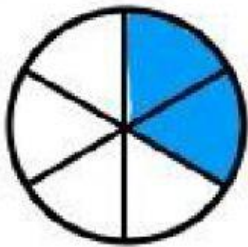
$$\frac{2}{6}$$



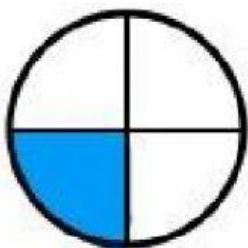
$$\frac{2}{7}$$



$$\frac{4}{5}$$



$$\frac{2}{3}$$



$$\frac{3}{4}$$