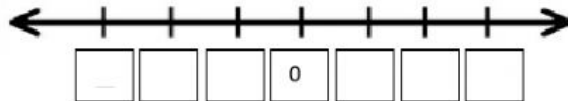
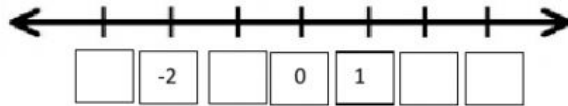


Negative Number Worksheet

Look at the number lines and complete the missing number!

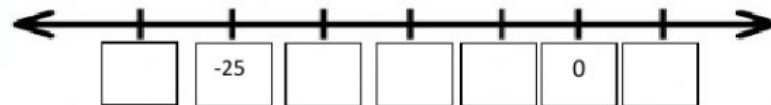


Place these numbers into the the number lines correctly!

1 4 -3 -5 0 -1 5



-5 5 -15 -25 -10



Put the correct sign (<)/(>)!

- | | |
|------------------|-------------------|
| 1. 3 -6 | 6. 0 -1 |
| 2. -4 0 | 7. 3 -8 |
| 3. -7 -3 | 8. -25 -30 |
| 4. -11 -1 | 9. -4 1 |
| 5. 6 -6 | 10. 3 -10 |

Choose the correct answer!

1. Which of numbers below are smaller than -5?

a. -4 and 0	c. -7 and -19
b. -6 and -2	d. -2 and -3

2. Which number is bigger than -6 but smaller than 0?

a. -4 and -1	c. -7 and -19
b. -8 and -1	d. -8 and -3

3. The opposite of -17 is...


a. +17	c. 16
b. 17	d. all correct

4. Which group of numbers is arranged from the greatest to the smallest?

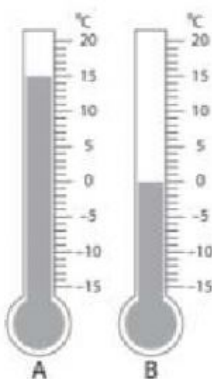
a. 0, 1, -3, -5 and 2	c. 6, 0, -5, -1 and -4
b. 0, -4, -2, -6 and -1	d. 0, -3, -5, -10 and -45

5. Which statement is true?

a. -9 is smaller than -10	c. -7 is equal with 7
b. -6 is bigger than -2	d. -2 is not equal to 2



1. What is the temperature of thermometer A?
2. What is the temperature of thermometer B?
3. Thermometer **A** has temperature than thermometer B



1. What is the temperature of Thermometer A?
2. What is the temperature of thermometer B?
3. Thermometer has higher temperature than .