

**o'clock**    **quarter past**    **half past**    **quarter to**

**one two three four five six seven eight nine ten eleven**

Remember if the time is a **past** time then we look at the number **before** the little arrow.


But if the number is a **to** time then we look at the number **after** the little arrow.

### Telling the time

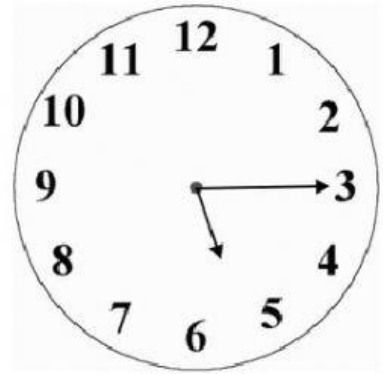
For each clock write in words what time it shows.



\_\_\_\_\_




\_\_\_\_\_




\_\_\_\_\_




\_\_\_\_\_




\_\_\_\_\_




\_\_\_\_\_



\_\_\_\_\_



\_\_\_\_\_



\_\_\_\_\_